


Name: _____

TANGY TUESDAY™

PACK	LEVEL	WEEK
------	-------	------

1	A	1
---	---	---

Step-by-step examples at tangmath.com/puzzles



TANGY TUESDAY

Pack 1

DigiCross · Snake · NumTanga · Kakooma · Equato


Name: _____

DIGICROSS

Step-by-step examples at tangmath.com/puzzles

TANGY TUESDAY™		
PACK	LEVEL	WEEK
1	A	1

Complete the crossword by filling in a word that fits each clue.



seven one false greater morning ten twelve sixteen

ACROSS

- 95 is ___ than 82
- $14 = 7 + \underline{\quad}$
- $18 - 8 = \underline{\quad}$
- $2 + 3 = 8 - 4$

DOWN

- $10 + 6 = \underline{\quad}$
- kids eat breakfast in the ___
- 18 has ___ ten
- $8 + 4 = \underline{\quad}$

Name: _____

TANGY TUESDAY™

SNAKE

PACK	LEVEL	WEEK
1	A	1

Step-by-step examples at tangmath.com/puzzles

Fill each empty box, in order, combining the numbers from the previous 2 boxes.

6	-3		+1		-2		+1	
								+3
	+4		-5		+7		-5	
-6								
	+5		-3		-1		-1	1

10		+2			-2	
-3	-1		-6	+5		+1
-5	-1	+3	+2	-3		
	+6		-4			4

Name: _____


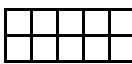
TANGY TUESDAY™




NUMTANGA


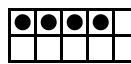
Step-by-step examples at tangmath.com/puzzles





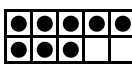
PACK	LEVEL	WEEK
1	A	1


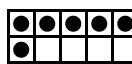
In each empty box, write the matching value between adjacent cards.


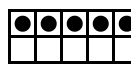
2	
	nine





15	 
	three



7	
	fifteen




3	   
	four

8	
	one

0	
	seven

10	  
	zero

1	
	ten

5	 
	two

Name: _____

KAKOOMA

Step-by-step examples at tangmath.com/puzzles

TANGY TUESDAY™		
PACK	LEVEL	WEEK
1	A	1

In each group, circle the one number that is the sum or product of two other numbers.
Write the circled numbers in the final puzzle and solve.

		1	6		
		4	3		
11	9	+		4	10
2	3			8	12
		3	7		
		5	8		

Final Puzzle

	+	

Final Answer

Name: _____

TANGY TUESDAY™

EQUATO

Step-by-step examples at tangmath.com/puzzles

PACK	LEVEL	WEEK
1	A	1

Use each number once to complete the equations. Read equations left to right and top to bottom.

NUMBER BANK

2 3 4 5 6

	+	1	=	7
+		=		-
	=		-	
=		-		=
8	-		=	4