

PACK	LEVEL	WEEK
4	B	1

WORDY WEDNESDAY

Pack 4

Riddle Puzzles • Fill-in-the-Blank • Who Am I? • Split Decision • More or Less



Name: _____

WORDY WEDNESDAY™		
PACK	LEVEL	WEEK
4	B	1

WHO AM I?

Use the clue to figure out the answer.
Then write your answer in the box.

Step-by-step examples at:
tangmath.com/puzzles

I am between 35 and 45, and I have 3 ones.
What number am I?

I am less than 15 and my name starts with
the letter "t". I have 6 letters in my name.
Who am I?

SPLIT DECISION

Choose the correct answer for each question below.

Which is more money?

___ 1 dime and 2 pennies

___ 1 nickel and 8 pennies

Who ended up with fewer tickets?

___ JJ earned 24 tickets, but he
gave away 5 of them.

___ Carl earned 9 tickets in the
morning and 9 more in the
afternoon.

Name: _____

WORDY WEDNESDAY™

PACK	LEVEL	WEEK
1	B	1

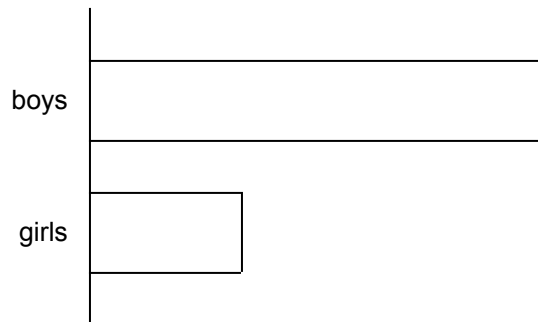
FILL IN THE BLANK

Use the numbers from the number bank to label the charts and fill in the blanks.

Step-by-step examples at:
tangmath.com/puzzles

Number bank:

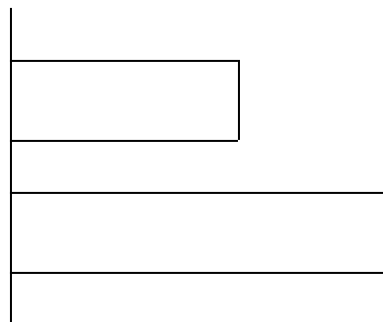
5 15 20



The soccer team has ___ players. ___ of them are boys and ___ are girls. There are more boys than girls.

Number bank:

4 6 10



Together, James and Sue have ___ markers. James has ___ markers and Sue has ___ markers. James has more markers than Sue.


Name: _____

WORDY WEDNESDAY™		
PACK	LEVEL	WEEK
1	B	1

MORE or LESS

Use the chart to answer the questions..

Step-by-step examples at:
tangmath.com/puzzles



- _____ 1. Are there fewer turtles or cats?
- _____ 2. How many fewer?
- _____ 3. How many animals in all?
- _____ 4. Are there more reptiles or mammals?
- _____ 5. How many more?