

PACK	LEVEL	WEEK
4	C	1

# WORDY WEDNESDAY

## Pack 4

Riddle Puzzles • Fill-in-the-Blank • Who Am I? • Split Decision • More or Less



Name: \_\_\_\_\_

WORDY WEDNESDAY™		
PACK	LEVEL	WEEK
4	C	1

# RIDDLE PUZZLES

Use number names to solve the riddle!

Step-by-step examples at:  
[tangmath.com/puzzles](http://tangmath.com/puzzles)

## What ocean animal can be yellow, red, or blue?

\_\_\_\_\_ 1 \_\_\_\_\_ 2 3 4

1. Luke had some stamps. Jude gave him 18 more stamps. Now Luke has 49 stamps. How many stamps did Luke have at first?

\_\_\_\_\_ What is the **seventh** letter in your answer? \_\_\_\_\_  
1

2. Mike picked some oranges. He gave 16 oranges to Jade. Now Mike has 32 oranges. How many oranges did Mike pick?

\_\_\_\_\_ What is the **fourth** letter in your answer? \_\_\_\_\_  
2

3. Leo bought some socks. He gave 24 socks to Annie. Now Leo has 14 socks. How many socks did Leo buy?

\_\_\_\_\_ What is the **seventh** letter in your answer? \_\_\_\_\_  
3

4. There were some birds on a wire. 13 more birds landed on the wire. Now the wire has 45 birds. How many birds were on the wire at first?

\_\_\_\_\_ What is the **fourth** letter in your answer? \_\_\_\_\_  
4

Name: \_\_\_\_\_

WORDY WEDNESDAY™		
PACK	LEVEL	WEEK
1	C	1

## WHO AM I?

Use the clue to figure out the answer.  
Then write your answer in the box.

Step-by-step examples at:  
[tangmath.com/puzzles](http://tangmath.com/puzzles)

I am between 43 and 53. I have 8 ones.  
What number am I?

I am less than 15. My name starts with the  
letter "s". I have five letters in my name.  
Who am I?

---

## SPLIT DECISION

Choose the correct answer for each question below.

Which is more money?

\_\_\_ 4 pennies and 1 dime

\_\_\_ 8 pennies and 1 nickel

Who ended up with fewer apples?

\_\_\_ Cindy picked 32 apples. She  
ate 3 of the apples.

\_\_\_ Bart picked 14 apples. Then  
he picked 13 more apples.

Name: \_\_\_\_\_

WORDY WEDNESDAY™		
PACK	LEVEL	WEEK
1	C	1

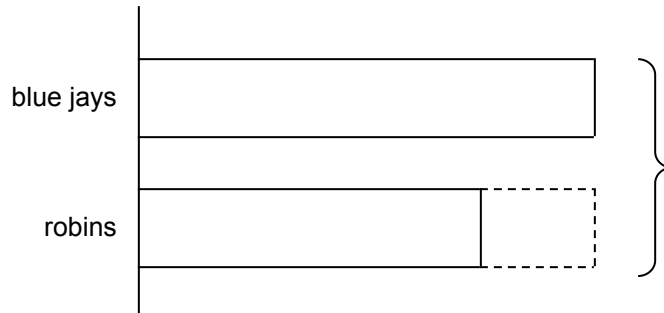
# FILL IN THE BLANK

Use the numbers from the number bank to label the charts and fill in the blanks.

Step-by-step examples at:  
[tangmath.com/puzzles](http://tangmath.com/puzzles)

Number bank:

3    9    12    21

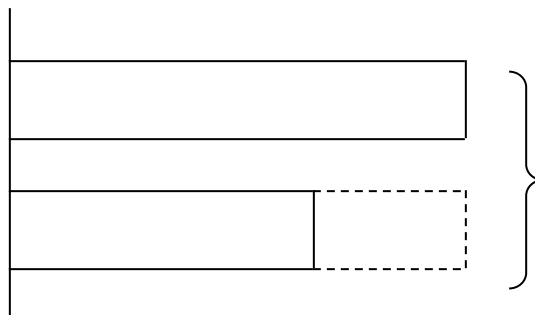


There are \_\_\_ blue jays and \_\_\_ robins in the tree. There are \_\_\_ birds in the tree all together. There are \_\_\_ more blue jays than robins.

-----

Number bank:

5    10    15    25



Ling picked \_\_\_ red apples and \_\_\_ green apples. She picked \_\_\_ apples in all.

Ling picked \_\_\_ more red apples than green apples.


Name: \_\_\_\_\_

WORDY WEDNESDAY™		
PACK	LEVEL	WEEK
1	C	1

# MORE or LESS

Use the chart to answer the questions..

Step-by-step examples at:  
[tangmath.com/puzzles](http://tangmath.com/puzzles)



X = 2 animals

- \_\_\_\_\_ 1. How many dogs?
- \_\_\_\_\_ 2. How many more turtles than dogs?
- \_\_\_\_\_ 3. How many more reptiles than mammals?
- \_\_\_\_\_ 4. How many animals in all?