


Name: \_\_\_\_\_

**TANGY TUESDAY™**

PACK	LEVEL	WEEK
2	K	1

Step-by-step examples at [tangmath.com/puzzles](https://tangmath.com/puzzles)



# TANGY TUESDAY

## Pack 2

Word Search · Maze · Digit Detective · Number Buddies · Square

Name: \_\_\_\_\_

# WORD SEARCH

Step-by-step examples at [tangmath.com/puzzles](https://tangmath.com/puzzles)

**TANGY TUESDAY™**

PACK LEVEL WEEK

2

K

1

Spell your answers, then search for them below.

ten more greater two six three five four

1 + 1

\_\_\_\_\_

1, 2, 3, 4, \_\_\_\_\_

\_\_\_\_\_

3 is \_\_\_\_\_ than 2

\_\_\_\_\_

1 more than 3

\_\_\_\_\_

10

\_\_\_\_\_

four plus \_\_\_\_\_ makes ten

\_\_\_\_\_

the opposite of less

\_\_\_\_\_

a triangle has \_\_\_\_\_ sides

\_\_\_\_\_

j	f	o	u	r	i	i
s	i	x	t	s	m	g
r	v	r	t	w	o	o
t	e	n	r	a	r	e
s	t	h	r	e	e	u
a	h	n	h	y	r	a
g	r	e	a	t	e	r

Name: \_\_\_\_\_






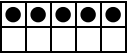



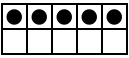





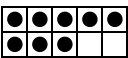
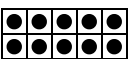

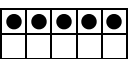




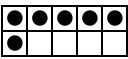
# MAZE

Step-by-step examples at [tangmath.com/puzzles](http://tangmath.com/puzzles)

**TANGY TUESDAY™**

PACK	LEVEL	WEEK
2	K	1

Find your way from the top to the bottom of the maze.  
Draw a circle around the things that show 5.

	8	8		
				
				
	5	5		
10				
			5	

Name: \_\_\_\_\_

# **DIGIT DETECTIVE**

Step-by-step examples at [tangmath.com/puzzles](https://tangmath.com/puzzles)

**TANGY TUESDAY™**

PACK	LEVEL	WEEK
2	K	1

To solve the puzzle, here's what to do. Cross off the numbers that fit each clue.  
With clever sleuth-work, when you're done, you'll be left with only one!

Greater than 7

Less than 3

○ ○ ○ ○ ○ ○

One more than 3

One less than 4

What number am I?

1

2

3

0

9

10

5

8

6

4

Name: \_\_\_\_\_

# NUMBER BUDDIES

Step-by-step examples at [tangmath.com/puzzles](https://tangmath.com/puzzles)

**TANGY TUESDAY™**

PACK	LEVEL	WEEK
2	K	1

Draw lines to match each clue in the center  
with exactly one number on the left and one number on the right.  
It takes clever thinking to find the right Number Buddies for each clue!

5

Equal

5

3

Greater than 6

2

8

Less than 4

7

Name: \_\_\_\_\_

# SQUARE

Step-by-step examples at [tangmath.com/puzzles](https://tangmath.com/puzzles)

**TANGY TUESDAY™**

PACK	LEVEL	WEEK
------	-------	------

2	K	1
---	---	---

Use your counting skills to fill in the missing numbers.

1	2	
4		6
	8	9

	3	4
5	6	
8		10

4		6
7	8	
	11	12

3	4	
6		8
	10	11