


Name: _____

TANGY TUESDAY™

PACK	LEVEL	WEEK
------	-------	------

2	C	1
---	---	---

Step-by-step examples at tangmath.com/puzzles



TANGY TUESDAY

Pack 2

Word Search · Maze · Digit Detective · Number Buddies · Square

Name: _____

WORD SEARCH

Step-by-step examples at tangmath.com/puzzles

PACK	LEVEL	WEEK
2	C	1

Spell your answers, then search for them below.

2 groups with 3 in each group

s i x

8 divided into 2 equal groups

f o u r

3 groups of 8 = ___ groups of 3

e i g h t

32 is closest to ___ tens

t h r e e

$127 + 452 = 500 + \underline{\quad} + 9$

s e v e n t y

$589 - 354 = 200 + \underline{\quad} + 5$

t h i r t y

$2 \times 40 = 2 \times 4 \underline{\quad}$

t e n s

one of 4 equal parts

f o u r t h

:20 = twenty ___

m i n u t e s

t	n	t	o	s	w	w	f
e	t	h	i	r	t	y	o
n	h	r	s	t	j	f	u
s	e	e	i	g	h	t	r
t	r	e	x	a	e	j	h
l	s	e	v	e	n	t	y
f	o	u	r	t	h	h	g
n	m	i	n	u	t	e	s

Name: _____

MAZE

Step-by-step examples at tangmath.com/puzzles

Find your way from the top to the bottom of the maze.
Circle the expression if the sum is 60.

$15 + 49$	$29 + 31$ -----	$40 + 22$	$19 + 40$	$18 + 48$
$38 + 22$ -----	$19 + 41$ -----	$33 + 31$	$30 + 32$	$28 + 34$
$11 + 49$ -----	$39 + 17$	$34 + 28$	$16 + 50$	$41 + 20$
$17 + 43$ -----	$26 + 34$ -----	$32 + 28$ -----	$20 + 40$ -----	$22 + 38$ -----
$19 + 40$	$26 + 36$	$20 + 42$	$18 + 46$	$12 + 48$ -----

Name: _____

TANGY TUESDAY™

DIGIT DETECTIVE

Step-by-step examples at tangmath.com/puzzles

PACK	LEVEL	WEEK
2	C	1

To solve the puzzle, here's what to do. Cross off the numbers that fit each clue.
With clever sleuth-work, when you're done, you'll be left with only one!

Name has fewer than 5 letters	$8 + 8 + 8 + 8$	$54 - 36$
$9 + 15 + 16$	Odd	Wheels on 4 cars

What number am I?

50 ~~15~~ ~~16~~ ~~18~~

~~31~~ ~~3~~ ~~4~~ ~~10~~ ~~2~~

~~40~~ ~~32~~ ~~6~~ ~~27~~

Name: _____

TANGY TUESDAY™


NUMBER BUDDIES

Step-by-step examples at tangmath.com/puzzles

PACK	LEVEL	WEEK
2	C	1

Draw lines to match each clue in the center
with exactly one number on the left and one number on the right.
It takes clever thinking to find the right Number Buddies for each clue!

2



Sum is 10

2


6



Equal

4


7



Greater than 6

3

8



Odd

9

Name: _____

SQUARE

Step-by-step examples at tangmath.com/puzzles

TANGY TUESDAY™		
PACK	LEVEL	WEEK
2	C	1

In each puzzle, fill the white squares with the numbers 1-9 (with no repeats), so the gray squares equal the sum of each row and column.

9	5	6	20
1	8	2	11
4	3	7	14
14	16	15	

7	2	4	13
9	1	8	18
5	3	6	14
21	6	18	

9	7	3	19
2	4	8	14
5	1	6	12
16	12	17	

7	3	2	12
9	5	8	22
1	4	6	11
17	12	16	