

| PACK | LEVEL | WEEK |
|------|-------|------|
| 4 | B | 1 |

ANSWER KEY

WORDY WEDNESDAY

Pack 4

Riddle Puzzles • Fill-in-the-Blank • Who Am I? • Split Decision • More or Less



Name: _____

| WORDY WEDNESDAY™ | | |
|------------------|-------|------|
| PACK | LEVEL | WEEK |
| 4 | B | 1 |

WHO AM I?

Use the clue to figure out the answer.
Then write your answer in the box.

Step-by-step examples at:
tangmath.com/puzzles

I am between 35 and 45. I have 3 ones.
What number am I?

43

I am less than 15. My name starts with the
letter "t". I have 6 letters in my name.
Who am I?

12

SPLIT DECISION

Choose the correct answer for each question below.

Which is more money?

___ 1 dime and 2
pennies

X 1 nickel and 8
pennies

Who ended up with fewer
tickets?

___ JJ earned 24 tickets. He
gave away 5 tickets.

X Carl earned 9 tickets in the
morning. He earned 9
tickets in the afternoon.

Name: _____

WORDY WEDNESDAY™

PACK LEVEL WEEK

4 B 1

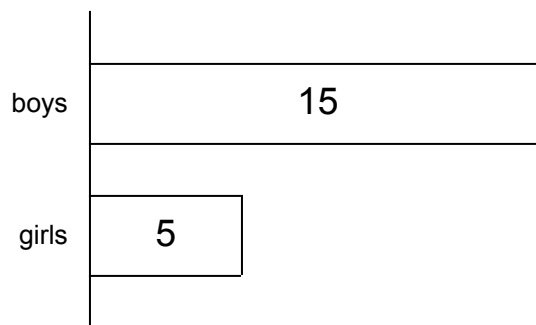
FILL IN THE BLANK

Use the numbers from the number bank to label the charts and fill in the blanks.

Step-by-step examples at:
tangmath.com/puzzles

Number bank:

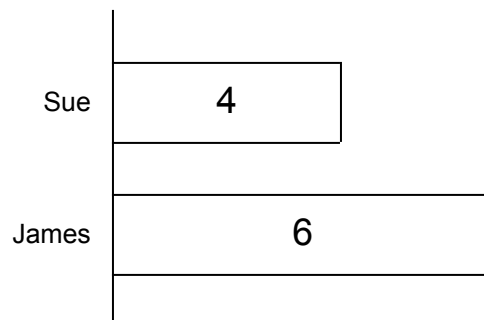
5 15 20



The soccer team has 20 players. 15 of them are boys and 5 are girls. There are more boys than girls.

Number bank:

4 6 10



Together, James and Sue have 10 markers. James has 6 markers and Sue has 4 markers. James has more markers than Sue.


Name: _____

| WORDY WEDNESDAY™ | | |
|------------------|-------|------|
| PACK | LEVEL | WEEK |
| 4 | B | 1 |

MORE or LESS

Use the chart to answer the questions..

Step-by-step examples at:
tangmath.com/puzzles



cats

1. Are there fewer turtles or cats?

4

2. How many fewer?

16

3. How many animals in all?

mammals

4. Are there more reptiles or mammals?

2

5. How many more?