



TANGY TUESDAY PUZZLE PACK!

Fun brain puzzles that make you smarter!

GRADE
1

Halloween
tangmath.com

Bonus
Pack



WORD SEARCH

TANGY TUESDAY PUZZLE PACK
1.1.8

Name: _____

tangmath.com © Greg Tang

Spell your answers, then search for them below.
Hidden words are spelled left to right and top to bottom.

whole ones greater six twelve hexagon false ten clock

- 9 + 3

- 18 - 8

- 12 = ____ + 6

- 6 + 1 = 3 + 3

- 54 is ____ than 45

- 24 has 4 ____

- people use a ____ to tell time

- a ____ has 6 vertices

- four fourths make a ____

h	w	h	o	l	e	b
e	l	k	r	m	o	t
x	t	w	e	l	v	e
a	f	a	l	s	e	n
g	r	e	a	t	e	r
o	n	e	s	i	x	n
n	f	c	l	o	c	k

SNAKE

TANGY TUESDAY PUZZLE PACK
1.1.9

Name: _____

tangmath.com © Greg Tang

Fill in each blank box in order, combining the numbers from the previous two boxes.

3	+4		-6		+8		-2	
								-5
	-6		+3		+5		-1	
+3								
	-2		+6		-7		+3	6

2			-3			+2	
+2		-1		+2		-5	+3
-3		+5		+5		+5	+1
	+1				-9		7

NUMTANGA


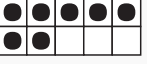
TANGY TUESDAY PUZZLE PACK



1.1.9



Name: _____



tangmath.com © Greg Tang


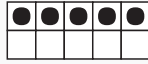
In each empty box, write the matching value between adjacent cards.


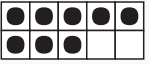
9	
	eight



2	
	nine



5	
	two



4	
	six

0	
	seven

3	
	four

15	
	three

7	
	fifteen

20	
	five

MAZE

TANGY TUESDAY PUZZLE PACK

1.1.8

Name: _____

tangmath.com © Greg Tang

Find a path through the maze from top to bottom.
Draw a circle around the problem if the answer is 7.

$___ + 2 = 9$	$4 + ___ = 10$	$4 + 2 = ___$	$___ + 0 = 8$	$9 + ___ = 9$
$7 + 0 = ___$	$2 + 5 = ___$	$5 + ___ = 7$	$___ + 9 = 10$	$___ + 4 = 8$
$7 + 3 = ___$	$3 + 4 = ___$	$2 + ___ = 9$	$4 + ___ = 11$	$4 + ___ = 7$
$8 + ___ = 8$	$2 + ___ = 7$	$___ + 5 = 8$	$6 + 1 = ___$	$___ + 5 = 8$
$___ + 0 = 8$	$3 + ___ = 10$	$5 + 2 = ___$	$___ + 3 = 10$	$1 + 1 = ___$
$___ + 4 = 11$	$___ + 1 = 8$	$5 + ___ = 9$	$___ + 0 = 5$	$4 + 2 = ___$
$1 + ___ = 8$	$4 + ___ = 7$	$___ + 1 = 7$	$6 + ___ = 6$	$___ + 9 = 10$

EQUATO

TANGY TUESDAY PUZZLE PACK
1.1.9

Name: _____

tangmath.com © Greg Tang

Fill in the empty boxes to make every horizontal and vertical equation correct.
Read equations left to right and top to bottom. Use every number in the bank once.

1 2 3 4 5

7	-		=	
-		=		+
6	=	8	-	
=		-		=
	+		=	6