


Name: _____

TANGY TUESDAY™

PACK	LEVEL	WEEK
------	-------	------

1	A	29
---	---	----

Step-by-step examples at tangmath.com/tutorials



TANGY TUESDAY

Pack 1

DigiCross · Snake · NumTanga · Kakooma · Equato


Name: _____

DIGICROSS

Step-by-step examples at tangmath.com/tutorials

TANGY TUESDAY™		
PACK	LEVEL	WEEK
1	A	29

Complete the crossword by filling in a word that fits each clue.



ten eight five less true forty-eight twelve thirty-two

ACROSS

2. ___ tens + 10 ones = 9 tens
4. $32 + 16$
7. $6 + 5 + 1$
8. $50 + 33 = 83$

DOWN

1. $18 - \underline{\quad} = 13$
3. $42 - 10$
5. 8:10 is ___ minutes after 8:00
6. 3 tens is ___ than 32

Name: _____

SNAKE

Step-by-step examples at tangmath.com/tutorials

TANGY TUESDAY™		
PACK	LEVEL	WEEK
1	A	29

Fill each empty box, in order, combining the numbers from the previous 2 boxes.

3		+3			-9	
+11		+2		-4		+7
-10		-3		+3	+11	+3
	+3				-4	
						13

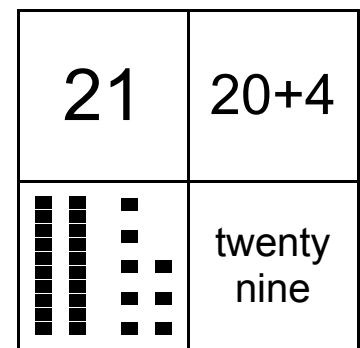
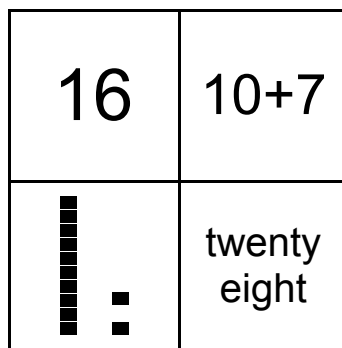
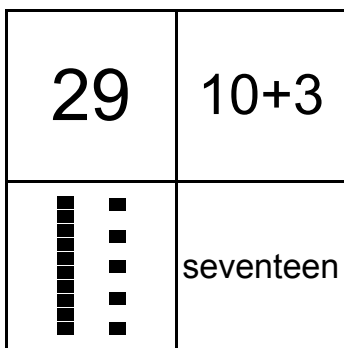
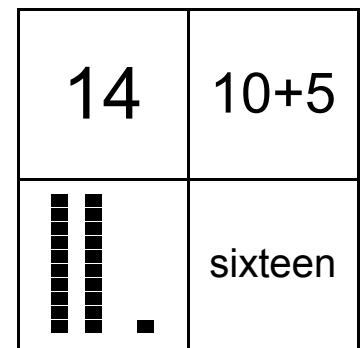
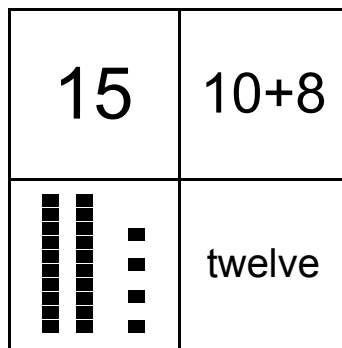
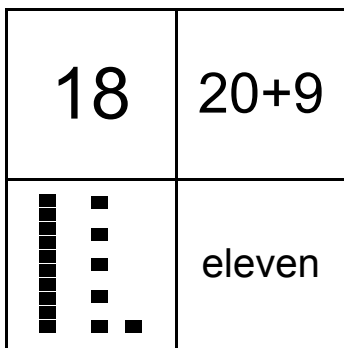
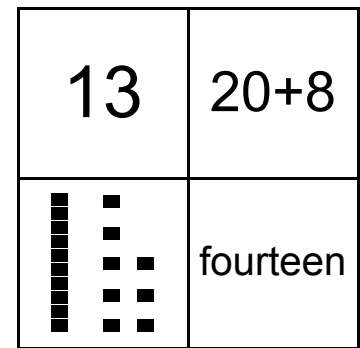
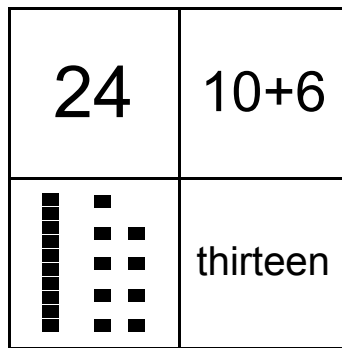
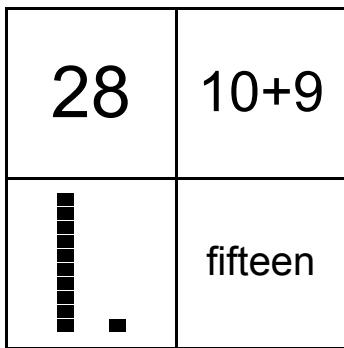
6	-2		-2		+3		+6	
								-5
	-10		+8		-1	10		
-2								+4
	+13		-9		+8		-7	

Name: _____

NUMTANGA

Step-by-step examples at tangmath.com/tutorials

In each empty box, write the matching value between adjacent cards.



Name: _____

KAKOOMA

PACK	LEVEL	WEEK
1	A	29

Step-by-step examples at tangmath.com/tutorials

In each group, circle the one number that is the sum or product of two other numbers.
Write the circled numbers in the final puzzle and solve.

5	16	4	16		
8	+	18	5	+	13
2	12	19	11		
2	11	12	18		
7	+	15	11	+	19
14	8	2	9		
2	10	6	14		
12	+	20	16	+	4
1	15	7	3		

Final Puzzle

	+	

Final Answer

Name: _____

TANGY TUESDAY™

EQUATO

PACK	LEVEL	WEEK
1	A	29

Step-by-step examples at tangmath.com/tutorials

Use each number once to complete the equations. Read equations left to right and top to bottom.

NUMBER BANK

2 3 4 5 6

	+		=	9
=		+		-
7	-		=	
-		=		=
	=	8	-	4