

PACK	LEVEL	WEEK
4	A	29

Step-by-step examples at:  
[gregtangmath.com/tutorials](http://gregtangmath.com/tutorials)

# WORDY WEDNESDAY

## Pack 4

Riddle Puzzles • Fill-in-the-Blank • Who Am I? • Split Decision • More or Less



Name: \_\_\_\_\_

# RIDDLE PUZZLES

PACK	LEVEL	WEEK
4	A	29

Use number names to solve the riddle!

Step-by-step examples at:  
[gregtangmath.com/tutorials](http://gregtangmath.com/tutorials)

**What do you get if you cross a frog with a rabbit?**

\_\_\_\_ u \_\_\_\_ n y      \_\_\_\_ 2 \_\_\_\_ 3 b b \_\_\_\_ 4 t

1. Jill had 11 baseballs. Greg gave her 3 baseballs. Eric gave her 3 baseballs. How many baseballs does Jill have now?

\_\_\_\_\_ What is the **fifth** letter in your answer?       
    

2. There were 13 birds in the tree. 9 birds flew away. How many birds are in the tree now?

\_\_\_\_\_ What is the **fourth** letter in your answer?       
    

3. Tate had 11 cards. Jason gave him some more. Now Tate has 19 cards. How many plums did Jason give Tate?

\_\_\_\_\_ What is the **second** letter in your answer?       
    

4. Zane had 7 limes. He sold some of them. Now he has 2 limes. How many limes did Zane sale?

\_\_\_\_\_ What is the **second** letter in your answer?

Name: \_\_\_\_\_

# WHO AM I?

Use the clue to figure out the answer.  
Then write your answer in the box.

PACK	LEVEL	WEEK
4	A	29

Step-by-step examples at:  
[gregtangmath.com/tutorials](http://gregtangmath.com/tutorials)

I am the month before October.  
What month am I?

I am the day before Monday.  
What day am I?

---

# SPLIT DECISION

Choose the correct answer for each question below.

Which letter is fifth from the left in the following word?  
stegosaurus

\_\_\_ o

\_\_\_ a

In which one is a "3" the third digit from the right?

\_\_\_ 543276

\_\_\_ 542376

Name: \_\_\_\_\_

# FILL IN THE BLANK

Use the numbers from the number bank to fill in the blanks.

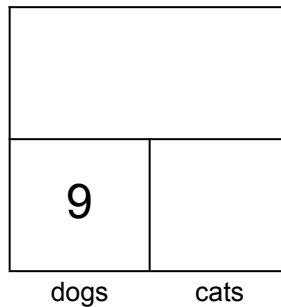
PACK	LEVEL	WEEK
4	A	29

Step-by-step examples at:  
[gregtangmath.com/tutorials](http://gregtangmath.com/tutorials)

Number bank:

16 7

total animals

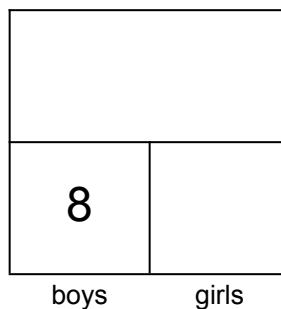


There are \_\_\_ animals in the shelter. 9 of the animals are dogs and \_\_\_ of the animals are cats.

Number bank:

11 19

total cousins



Mia has \_\_\_ cousins. 8 of the cousins are boys and \_\_\_ of them are girls.

Name: \_\_\_\_\_

# MORE OR LESS

Use reasoning and computational skills to complete the table and the graph.


PACK	LEVEL	WEEK
4	A	29

Step-by-step examples at: [gregtangmath.com/tutorials](http://gregtangmath.com/tutorials)

### Clues:

Ruth picked 2 fewer oranges than Dean.  
Together, Julia and Shane picked 12 oranges.

child	oranges
Ruth	
Julia	
Dean	9
Shane	



X = 1 orange