

PACK	LEVEL	WEEK
4	A	31

Step-by-step examples at:
gregtangmath.com/tutorials

WORDY WEDNESDAY

Pack 4

Riddle Puzzles • Fill-in-the-Blank • Who Am I? • Split Decision • More or Less



Name: _____

WHO AM I?

Use the clue to figure out the answer.
Then write your answer in the box.

PACK	LEVEL	WEEK
4	A	31

Step-by-step examples at:
gregtangmath.com/tutorials

I am between 55 and 71. My ones digit is the same as the number of sides on a square. What number am I?

I am less than 15. My name starts with the letter "t". I have 6 letters in my name. What number am I?

SPLIT DECISION

Choose the correct answer for each question below.

Mark finds that it takes 30 small paper clips to measure the width of his desk. Now he wants to do the same thing with large paper clips. Which of the following is true?

___ Mark will need more than 30 large paper clips.

___ Mark will need fewer than 30 large paper clips.

Kate is taller than Zeb. Kate is shorter than Mike. Who is shorter?

___ Zeb

___ Mike

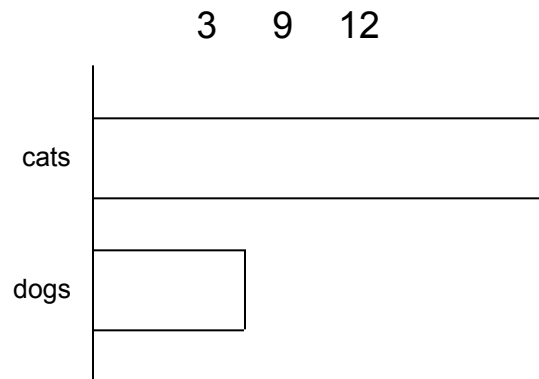
Name: _____

FILL IN THE BLANK

PACK	LEVEL	WEEK
4	A	31

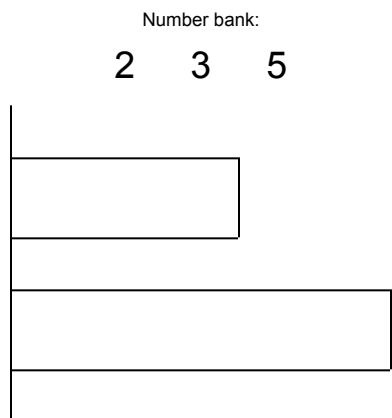
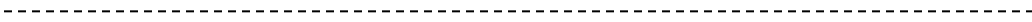
Use the numbers from the number bank to fill in the blanks and label the charts.

Step-by-step examples at: gregtangmath.com/tutorials



Jill has ___ pets. ___ are cats and ___ are dogs.

Jill has more cats than dogs.



Together, Ken and Lisa have ___ pencils. Ken has ___ pencils and Lisa has ___ pencils. Ken has more pencils than Lisa.

Name: _____

MORE OR LESS

Use reasoning and computational skills to complete the table and the graph.

PACK	LEVEL	WEEK
4	A	31

Step-by-step examples at: gregtangmath.com/tutorials

Clues:

There are 4 fewer cows than pigs.

There are 3 more birds than mammals.

farm animals	number
cows	
pigs	
ducks	6
chickens	

	X		
	X		
	X		
	X		
	X		
	X		
	X		
	X		
cows	pigs	ducks	chickens
<i>mammals</i>	<i>birds</i>		

X = 1 farm animal