

PACK	LEVEL	WEEK
4	B	31

Step-by-step examples at:
gregtangmath.com/tutorials

WORDY WEDNESDAY

Pack 4

Riddle Puzzles • Fill-in-the-Blank • Who Am I? • Split Decision • More or Less



Name: _____

RIDDLE PUZZLES

PACK	LEVEL	WEEK
4	B	31

Use number names to solve the riddle!

Step-by-step examples at:
gregtangmath.com/tutorials

What kind of animal is a snake?

_____ 1 _____ 2 _____ 3 _____ 4 _____

1. Chance has 43 ties. James has 25 ties. How many more ties does Chance have than James?

_____ What is the **first** letter in your answer? 1

2. Sue has 30 markers. Drew has 10 markers. How many fewer markers does Drew have than Sue?

_____ What is the **first** letter in your answer? 2

3. Drew has 44 quarters. Grant has 9 more quarters than Drew. How many quarters does Grant have?

_____ What is the **second** letter in your answer? 3

4. Joy has 38 sticks. Calvin has 27 fewer sticks than Joy. How many sticks does Calvin have?

_____ What is the **second** letter in your answer? 4

Name: _____

WHO AM I?

PACK	LEVEL	WEEK
4	B	31

Use the clue to figure out the answer.
Then write your answer in the box.

Step-by-step examples at:
gregtangmath.com/tutorials

I am more than 2 dozen. I am less than 3 groups of 11. I have 4 more ones than tens. Who am I?

I am an even number. I am greater than the value of 3 dimes. I am less than 2 rows of 17. What number am I?

SPLIT DECISION

Choose the correct answer for each question below.

Which is less money?

___ 3 dimes, 8 pennies, and 3 nickels

___ 2 nickels, 2 dimes, and 1 quarter

Which class is longer?

___ Reading class starts at 9:10 and ends at 9:47.

___ Math class starts at 10:14 and ends at 10:52.

Name: _____

FILL IN THE BLANK

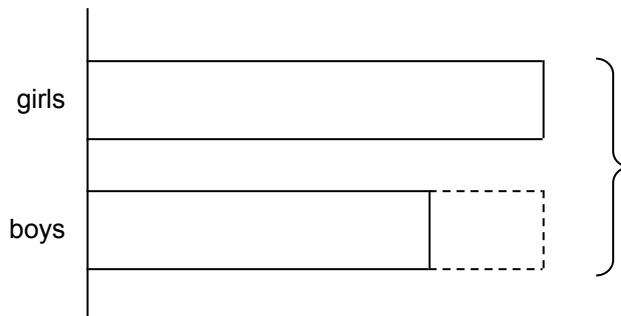
PACK	LEVEL	WEEK
4	B	31

Use the numbers from the number bank to label the bars and fill in the blanks.

Step-by-step examples at: gregtangmath.com/tutorials

Number bank:

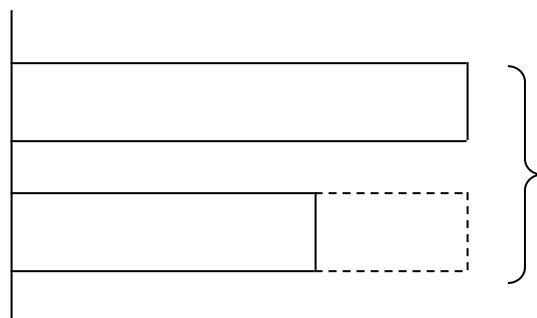
2 6 8 14



There are ___ girls and ___ boys on the soccer team. There are ___ students on the team all together. There are ___ more girls than boys on the team.

Number bank:

3 6 9 15



Diana drew ___ circles and ___ triangles in her notebook. She drew ___ shapes in all. Diana drew ___ fewer triangles than circles.

Name: _____

MORE OR LESS

Use reasoning and computational skills to complete the table and the graph.

PACK	LEVEL	WEEK
4	B	31

Step-by-step examples at: gregtangmath.com/tutorials

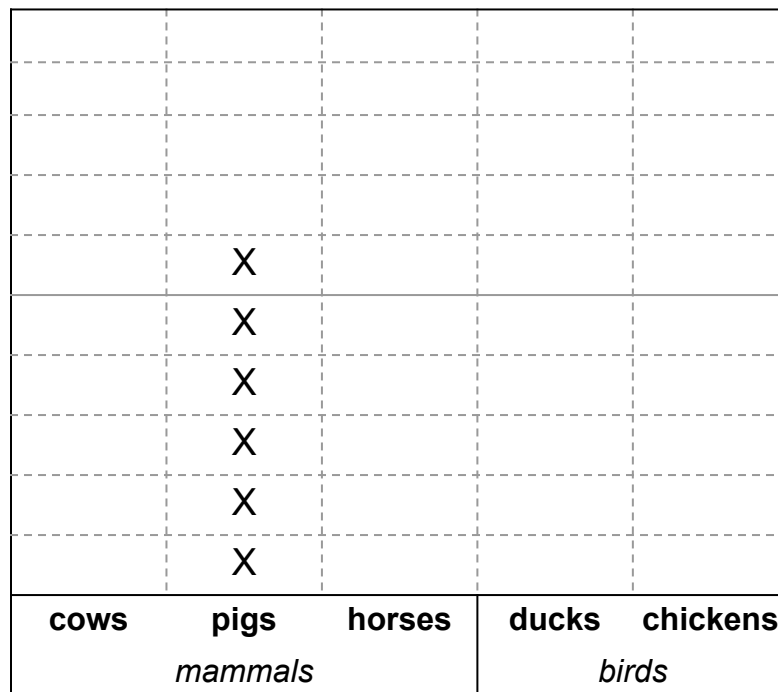
Clues:

There are 19 mammals.

There are 3 fewer cows than ducks.

There are 4 more mammals than birds.

farm animals	number
cows	
pigs	
horses	
ducks	7
chickens	



X = 1 farm animal