

SNAKE

TANGY TUESDAY PUZZLE PACK
1.2.11

Name: _____

tangmath.com © 2017-18 Greg Tang

Fill in each blank box in order, combining the numbers from the previous two boxes.

| | | |
|----|-----|-----|
| 4 | +6 | |
| | | +2 |
| | -1 | |
| +1 | | |
| | -11 | +11 |

| | | | | |
|-----|----|----|----|----|
| | -5 | | +7 | |
| +8 | | | | -6 |
| | | +4 | | |
| -10 | | | | |
| | | -2 | 5 | |

| | | |
|----|----|--|
| 4 | | |
| +1 | | |
| | | |
| -4 | | |
| | +5 | |

| | | |
|----|----|----|
| | -6 | |
| +5 | | +7 |
| | | |
| -2 | | |
| +1 | | |
| | -6 | |

| | | |
|----|----|-----|
| | +4 | |
| +1 | | +4 |
| | | |
| -2 | | |
| | | -11 |
| | | 1 |

WORD SEARCH

TANGY TUESDAY PUZZLE PACK
1.2.11

Name: _____

tangmath.com © 2017-18 Greg Tang

Spell your answers, then search for them below.
Hidden words are spelled left to right and top to bottom.

twenty halves fifteen greater true ones cube eight nine

14 $\hat{=}$ 5

7 + 8

18 - 8 = 5 + 5

76 is ___ than 67


1 ten + 1 ten

28 = 2 tens + 8 ___

8:00 = ___ o'clock

a ___ is a 3-dimensional shape

2 ___ make a whole



MAZE

TANGY TUESDAY PUZZLE PACK
1.2.11

Name: _____

tangmath.com © 2017-18 Greg Tang

Find a path through the maze from top to bottom.
Draw a circle around the number if the missing number is 1.

| | | | | |
|------------------------------|------------------------------|-----------------------------|------------------------------|-----------------------------|
| $8 - \underline{\quad} = 6$ | $10 - 8 = \underline{\quad}$ | $7 - \underline{\quad} = 5$ | $5 - \underline{\quad} = 4$ | $2 + \underline{\quad} = 4$ |
| $9 + \underline{\quad} = 10$ | $7 - 6 = \underline{\quad}$ | $9 - 8 = \underline{\quad}$ | $3 - 2 = \underline{\quad}$ | $\underline{\quad} - 2 = 0$ |
| $2 - \underline{\quad} = 1$ | $\underline{\quad} - 2 = 0$ | $1 + \underline{\quad} = 3$ | $6 - \underline{\quad} = 4$ | $\underline{\quad} + 4 = 6$ |
| $7 + \underline{\quad} = 8$ | $\underline{\quad} + 1 = 2$ | $6 + \underline{\quad} = 7$ | $3 - 1 = \underline{\quad}$ | $\underline{\quad} + 7 = 9$ |
| $\underline{\quad} + 7 = 9$ | $7 - 5 = \underline{\quad}$ | $8 + \underline{\quad} = 9$ | $6 + \underline{\quad} = 8$ | $6 - \underline{\quad} = 4$ |
| $3 + \underline{\quad} = 5$ | $5 + \underline{\quad} = 6$ | $8 - 7 = \underline{\quad}$ | $10 - \underline{\quad} = 8$ | $\underline{\quad} - 2 = 0$ |
| $3 - \underline{\quad} = 1$ | $10 - 9 = \underline{\quad}$ | $4 - 2 = \underline{\quad}$ | $4 - \underline{\quad} = 2$ | $\underline{\quad} + 3 = 5$ |

DIGIT DETECTIVE

TANGY TUESDAY PUZZLE PACK
1.2.11

Name: _____

tangmath.com © 2017-18 Greg Tang

To solve the puzzle, here's what to do: cross off the numbers that fit each clue.
With clever sleuth-work, when you're done, you'll be left with only one!

Between 20 and
30

Has 3 tens

Wheels on 2 cars
and 1 unicycle

$$40 + 5$$

$$\underline{\quad} - 5 = 8$$

What number am I?

34

22

9

45

28

32

13

23

43

25

NUMBER BUDDIES

TANGY TUESDAY PUZZLE PACK
1.2.11

Name: _____

tangmath.com © 2017-18 Greg Tang

Match a number on the left and a number on the right to each clue in the middle.
It takes clever thinking to find the right Number Buddies for each clue!

7

Equal

7

12

Sum is 15

12

5

Greater than 10

10

THANKSGIVING BONUS

TANGY TUESDAY PUZZLE PACK

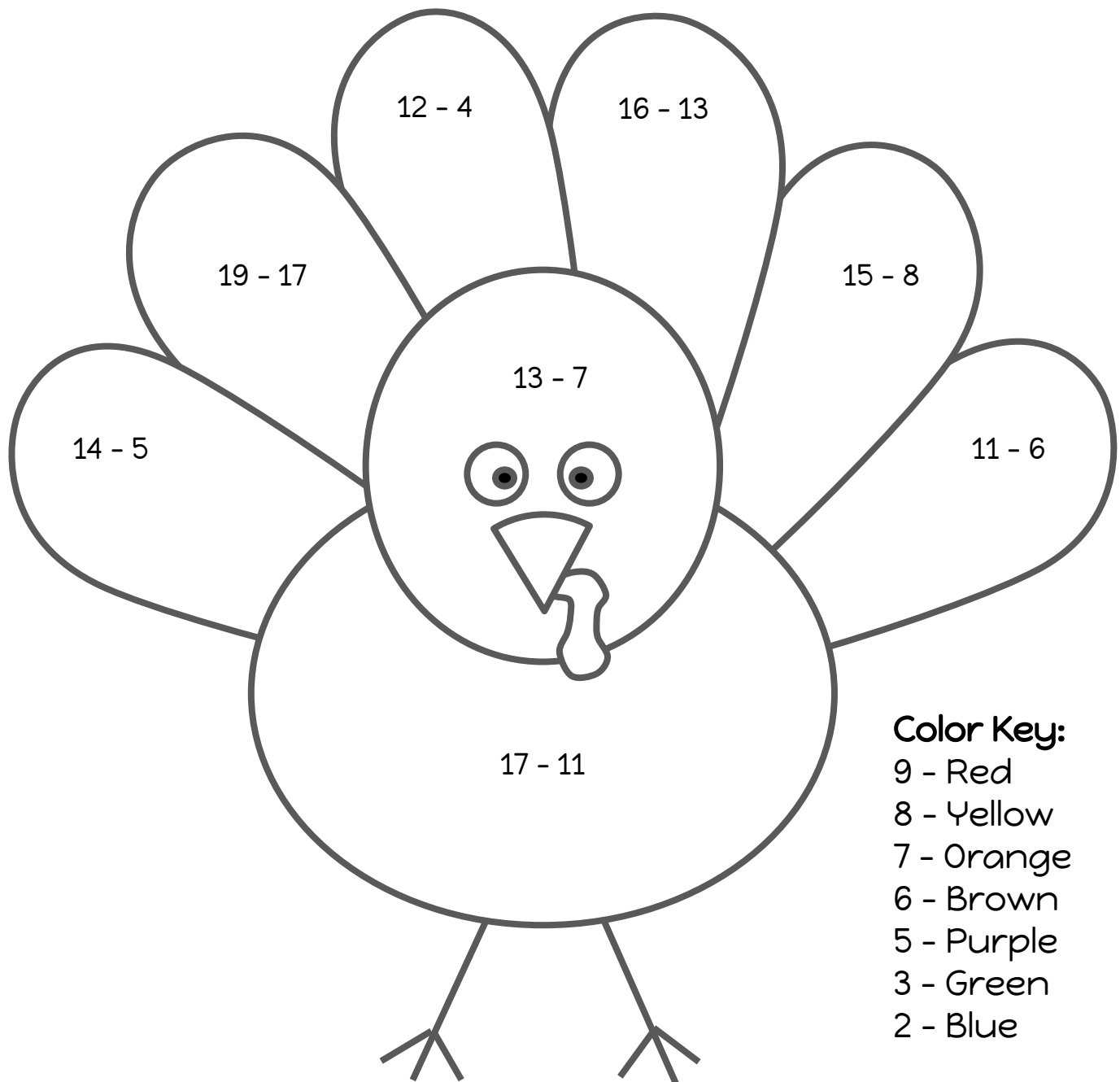
Level A


Name: _____

tangmath.com © 2017-18 Greg Tang

Directions:

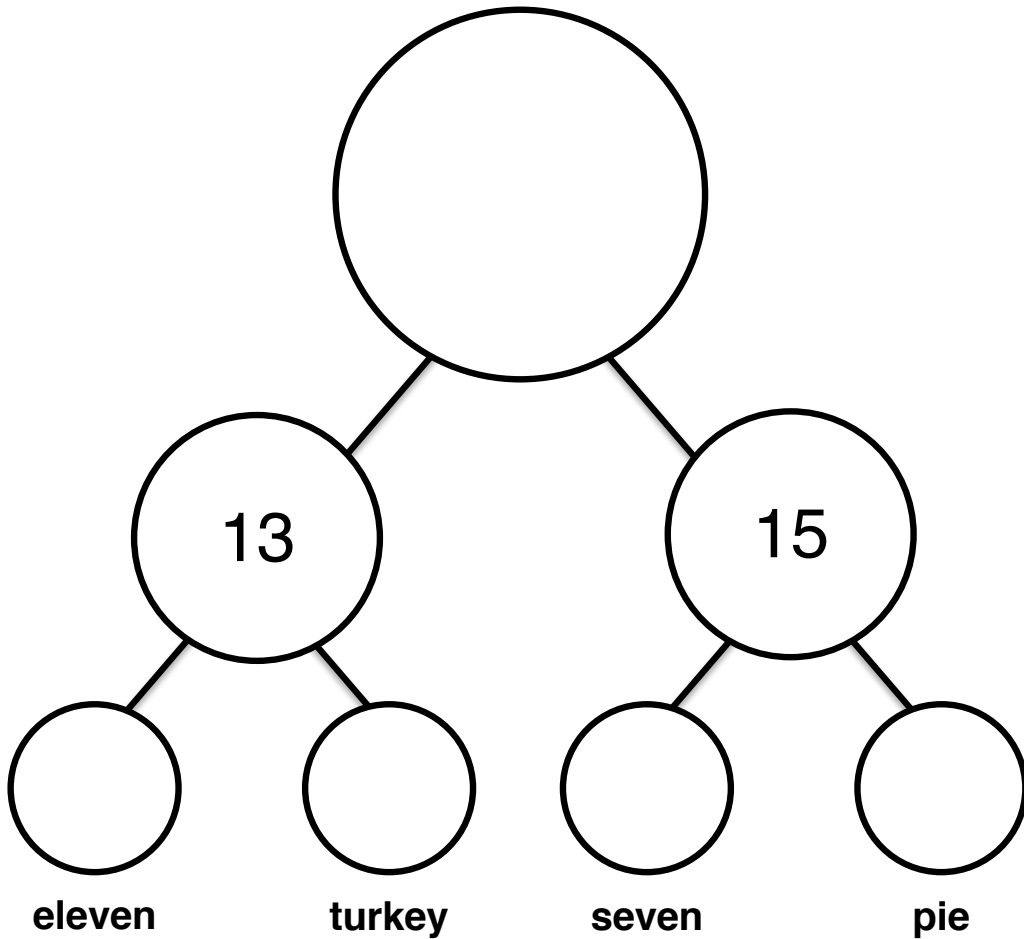
Solve each problem. Then color each part of the picture using the color key.





Tangy Turkey Day

Use the number bonds to solve the equation below! (+)



A word equation inside a rounded rectangular box. On the left is a turkey icon, followed by the word "tens". To the right of "tens" is a plus sign "+", followed by a pie icon with steam rising from it. To the right of the pie icon is an equals sign "=", followed by a blank line "_____".