


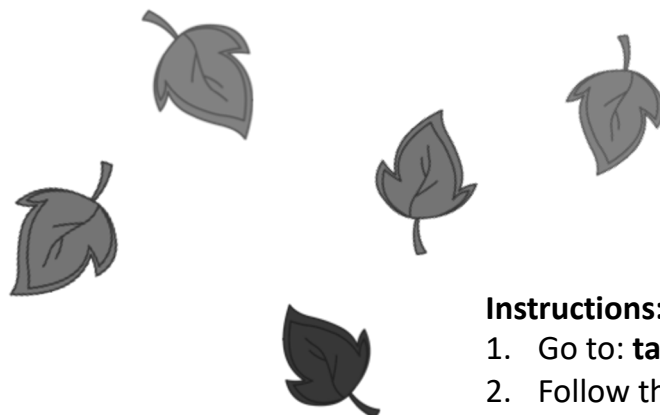
Greg Tang Math Level 2 Thanksgiving Challenge

Name _____

Parent Signature _____

START

FINISH



Instructions:

1. Go to: tangmath.com/thanksgiving/2
2. Follow the links for each activity.
3. Mark off each square on the game board as you complete the activity.
4. Return the game board to your teacher after Thanksgiving break!

<p>Play Ten Frame Mania for 10 minutes</p>	<p>Complete the attached Thanksgiving Puzzle Pack</p>			<p>Complete Pictarithm Worksheet</p>
<p>Play Coin Bubble for 10 minutes</p>	<p>Play Missing Subtract, Combo Level 1 for 10 minutes</p>		<p>Play NumTanga Levels 1, 2 & 3 for 10 minutes</p>	
<p>Play Math Limbo Play mode Level 1 for 10 minutes</p>	<p>Read Math For All Seasons</p>	<p>Play BreakApart Addition, Make 10 Level 1 for 10 minutes</p>	<p>Play Numskill Level 1 / 2 Sets for 10 minutes</p> <p>Notes:</p> <ul style="list-style-type: none"> • Have someone older, like Mom or Dad, help if you need it. • If the games are too easy, move to a harder level! 	

SNAKE

TANGY TUESDAY PUZZLE PACK
2.2.11

Name: _____

tangmath.com © 2017-18 Greg Tang

Fill in each blank box in order, combining the numbers from the previous two boxes.

28	+11		-7		-24		+29	
								-33
	-8		+7		+2		+11	
-10								
	+9		+9		+10		-1	33
36	-15		+1		+3		-22	
								+28
	+8		-23		+16	33		
-1								-27
	+30		-24		+9		+14	

WORD SEARCH

TANGY TUESDAY PUZZLE PACK
2.2.11

Name: _____

tangmath.com © 2017-18 Greg Tang

Spell your answers, then search for them below.
Hidden words are spelled left to right and top to bottom.

evening nine six fourteen less fifteen thirteen twelve seven

16 - ___ = 9

10 + 50 + 4 + 5 = 60 + ___

21 - 7 =

4 rows of 3 pears are ___ pears


135 = 100 + 20 + ___

130 has ___ tens

698 is ___ than 702

6:15 p.m. is in the ___

1 penny + 1 nickel = ___¢



DIGIT DETECTIVE

TANGY TUESDAY PUZZLE PACK
2.2.11

Name: _____

tangmath.com © 2017-18 Greg Tang

To solve the puzzle, here's what to do: cross off the numbers that fit each clue.
With clever sleuth-work, when you're done, you'll be left with only one!

Less than $21 - 7$

Tens digit is 8

Sides on 3
triangles and 2
squares

$30 + 40 + 5 + 3$

4 rows of 5

What number am I?

8

281

18

13

17

11

487

84

78

20

NUMBER BUDDIES

TANGY TUESDAY PUZZLE PACK
2.2.11

Name: _____

tangmath.com © 2017-18 Greg Tang

Match a number on the left and a number on the right to each clue in the middle.
It takes clever thinking to find the right Number Buddies for each clue!

10

Greater than 4

8

4

Difference is 6

10

2

Equal

4

SQUARE

TANGY TUESDAY PUZZLE PACK
2.2.11

Name: _____

tangmath.com © 2017-18 Greg Tang

Use your addition and subtraction skills to fill in the missing numbers.
In each 9-number square, every row and every column is a fact family.

2		10
	0	
6		

6		7
	1	
		17

7		
	11	
10		39

		33
	2	
34		38

THANKSGIVING BONUS

TANGY TUESDAY PUZZLE PACK

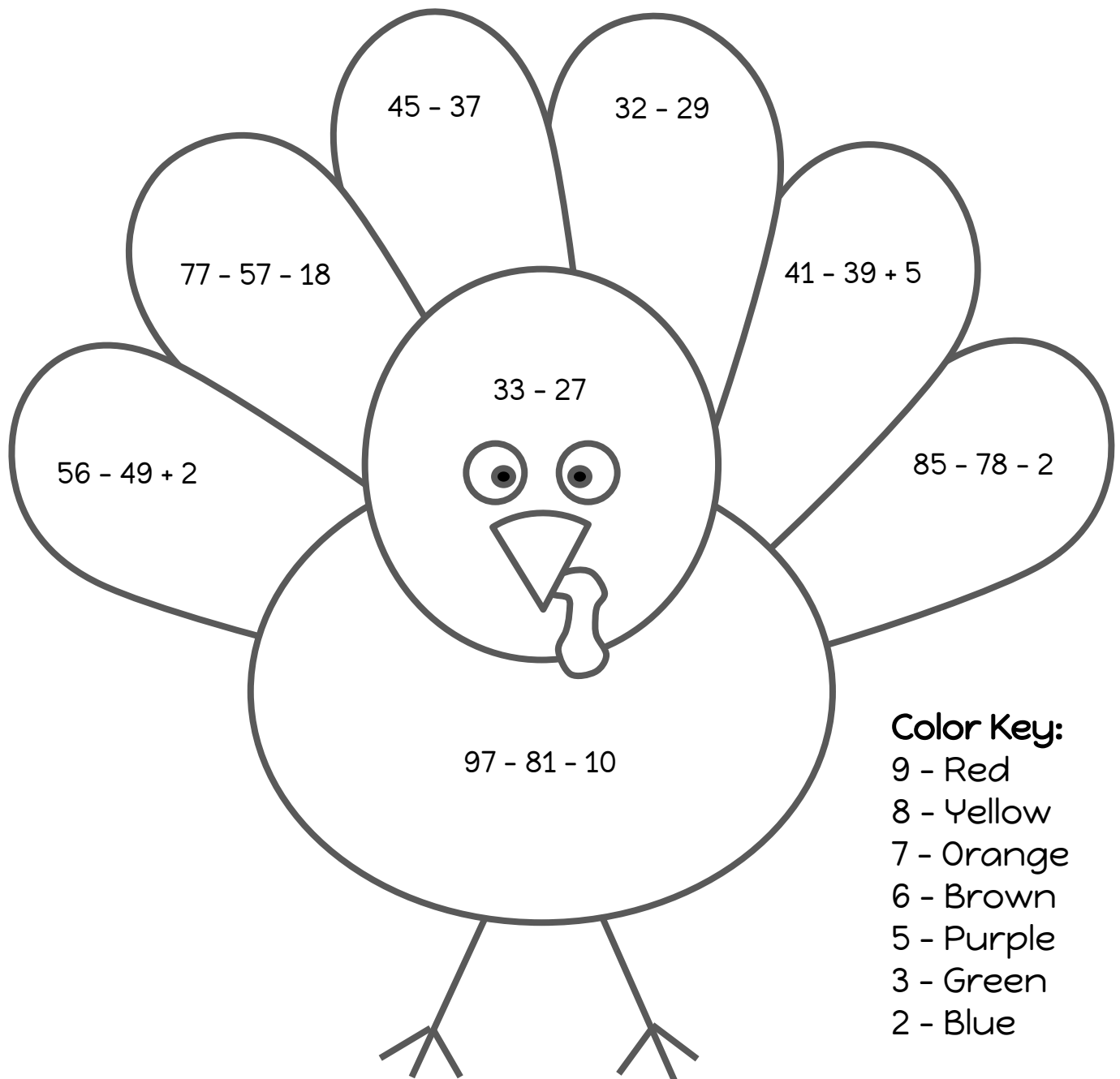
Level B


Name: _____

tangmath.com © 2017-18 Greg Tang

Directions:

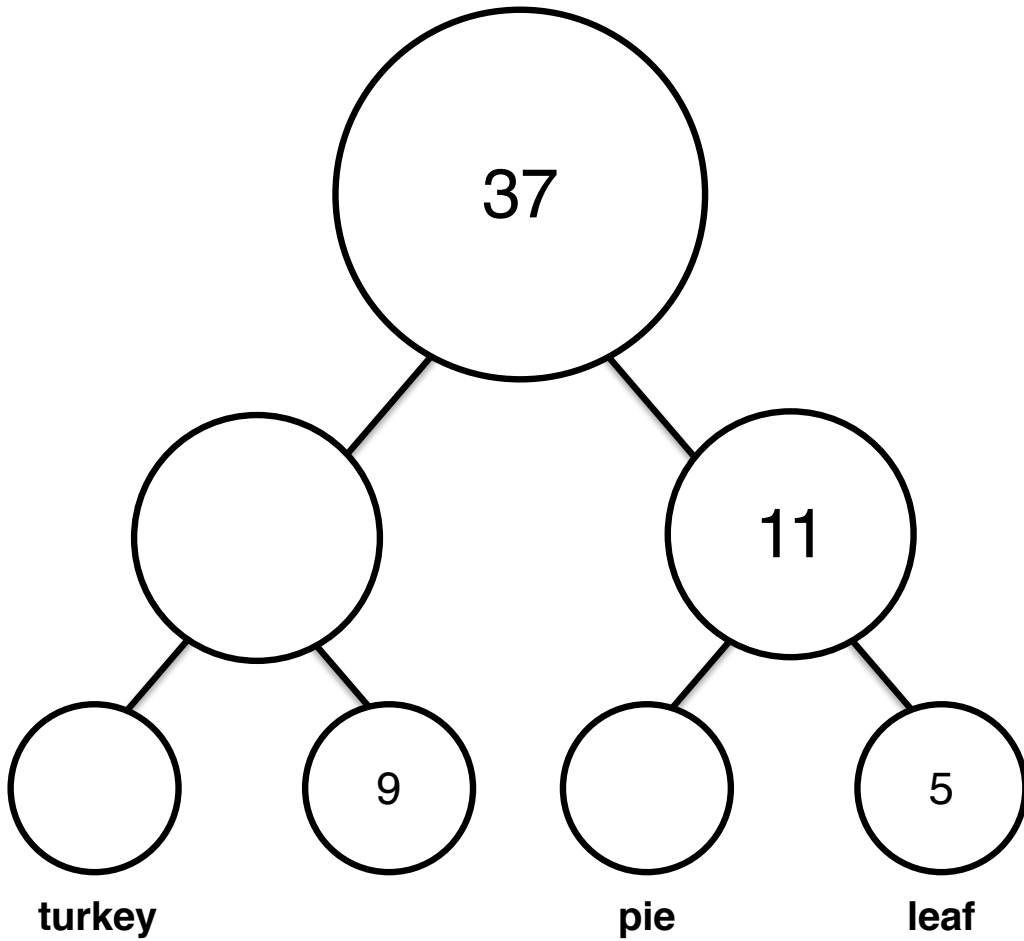
Solve each problem. Then color each part of the picture using the color key.








Tangy Turkey Day

Use the number bonds to solve the equation below! (++)




 +
 
 +
 
 = _____