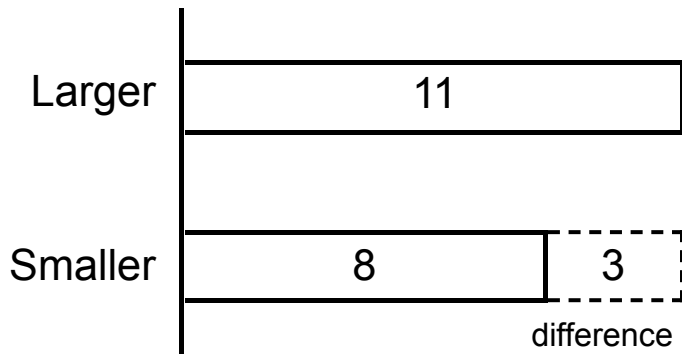


- A. The larger number is 11.
The smaller number is 8.
How much greater is 11 than 8?

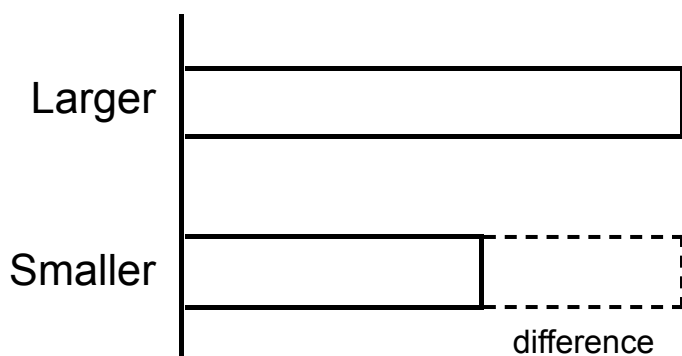


$$11 - 8 = \underline{3}$$

$$8 + \underline{3} = 11$$

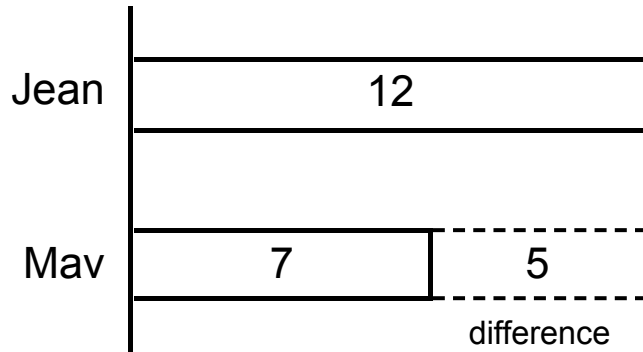
11 is 3 more than 8.

-
- B. The larger number is 15.
The smaller number is 9.
How much greater is 15 than 9?



15 is more than 9.

- A. Jean earns 12 ribbons.
Mav earns 7 ribbons.
Jean earns how many more ribbons than Mav?



$$12 - 7 = \underline{5}$$

$$7 + \underline{5} = 12$$

Jean earns 5 more ribbons than Mav.

-
- B. Alice catches 15 fish.
Bella catches 8 fish.
Alice catches how many more fish than Bella?

Alice catches more fish than Bella.

- A. Ivy picks 18 grapes.
Gwen picks 9 grapes.
Gwen picks how many fewer grapes than Ivy?

Gwen picks ___ fewer grapes than Ivy.

-
- B. Dax catches 14 fish.
Seth catches 7 fish.
Seth catches how many fewer fish than Dax?

Seth catches ___ fewer fish than Dax.

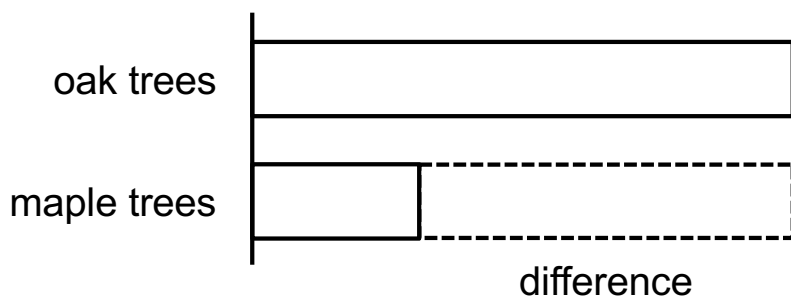
Name: _____

Larry planted 13 oak trees and 4 maple trees.

How many more oak trees did Larry plant than maple trees?

a. Show how many trees Larry planted.

Write a “?” for how many more oak trees Larry planted than maple trees.



b. Use a Make 10 Strategy to find how many more oak trees Larry planted than maple trees. Show your thinking with number bonds and equations.

c. Larry planted _____ more oak trees than maple trees.

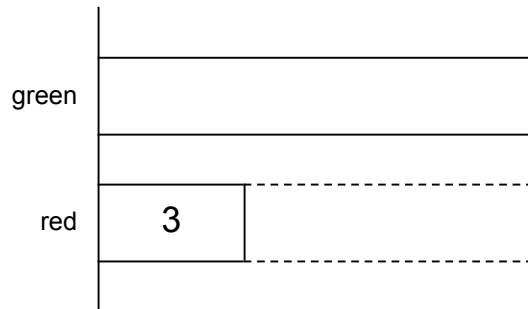
Name: _____

FILL IN THE BLANK - A

Use the numbers from the bank to correctly fill the blanks in each bar model and word problem.
Add labels to the bar model of the second problem.

Number bank:

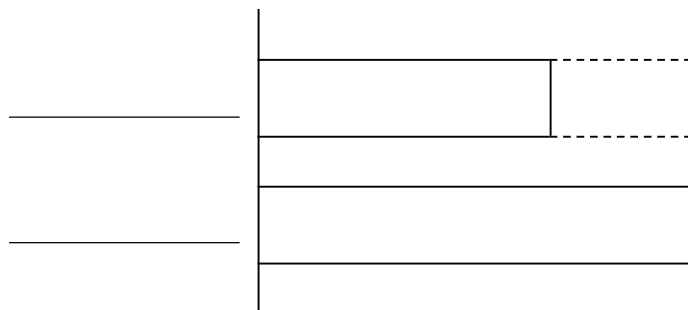
6 9



There are ____ more green apples than red apples in the basket. ____ of the apples are green. 3 of the apples are red.

Number bank:

2 4 6



Megan has ____ more stickers than Liam. Megan has ____ stickers. Liam has 4 stickers.