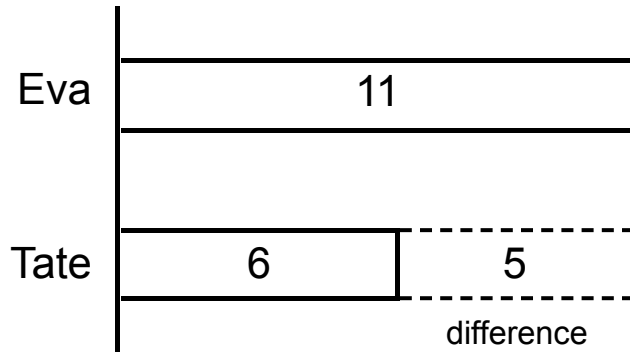


- A. Eva buys 11 stickers.
Tate buys 6 stickers.
Eva buys how many more stickers than Tate?



$$11 - 6 = \underline{5}$$

$$6 + \underline{5} = 11$$

Eva buys 5 more stickers than Tate.

-
- B. Grant earns 12 ribbons.
Leo earns 8 ribbons.
Grant earns how many more ribbons than Leo?

Grant earns more ribbons than Leo.

-
- A. Rob picks 13 grapes.
Brooke picks 7 grapes.
Brooke picks how many fewer grapes than Rob?

Brooke picks ___ fewer grapes than Rob.

-
- B. Gwen bakes 14 cookies.
Faith bakes 9 cookies.
Faith bakes how many fewer cookies than Gwen?

Faith bakes ___ fewer cookies than Gwen.

- A. Stella picks 15 cherries.
Josie picks 8 cherries.
Stella picks how many more cherries than Josie?

Stella picks ___ more cherries than Josie.

-
- B. Joy finds 18 shells.
Walker finds 9 shells.
Joy finds how many more shells than Walker?

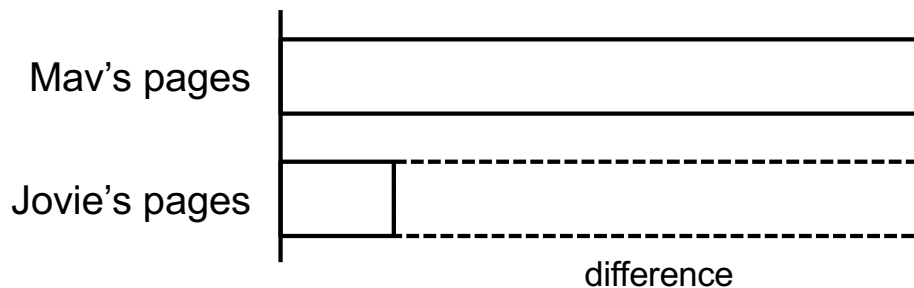
Joy finds ___ more shells than Walker.

Name:

Mav read 56 pages. Jovie read 10 pages.

How many more pages did Mav read than Jovie?

- a. Fill in the bar model to show how many pages Mav and Jovie each read. Use a “?” to show how many more pages Mav read than Jovie.



- b. Use a number bond and equations to calculate how many more pages Mav read than Jovie. Show your thinking.

Name: _____

MEASURE UP! - F

Use the hints at the top to complete the table at the bottom.

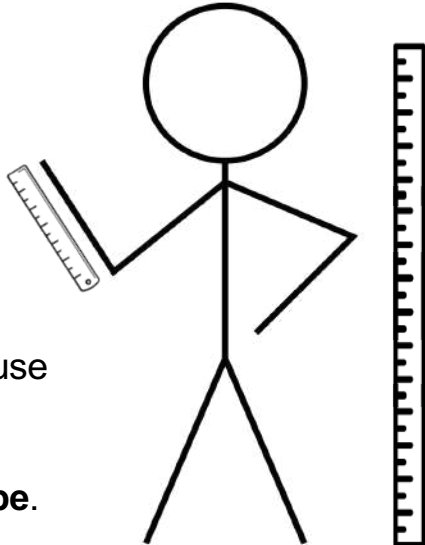


Helpful Hints:

If the object is shorter than the length of your arm (from elbow to fingertips), use a **ruler**.

If the object is shorter than your height, use a **yardstick** or **meter stick**.

For longer objects, use a **measuring tape**.



List at least 3 things in your classroom, school, or home, you would measure with a:

Ruler:	Yardstick or Meter Stick:	Measuring Tape