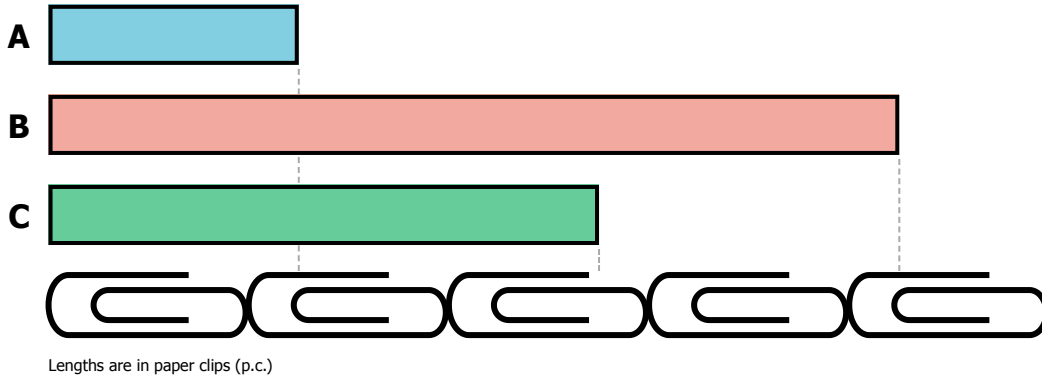


A.

The length of **A** is _____ p.c.

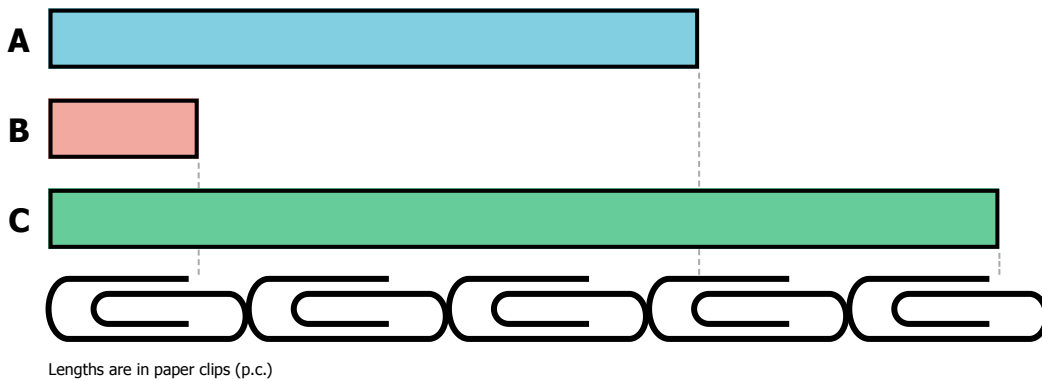
The shortest bar is _____ p.c.

The length of **B** is _____ p.c.

The longest bar is _____ p.c.

The length of **C** is _____ p.c.Order **ABC**: _____
shortest longest

B.

The length of **A** is _____ p.c.

The shortest bar is _____ p.c.

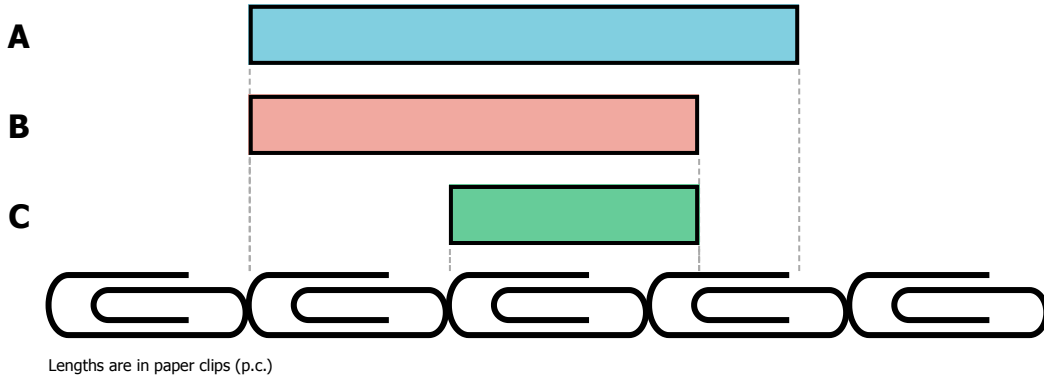
The length of **B** is _____ p.c.

The longest bar is _____ p.c.

The length of **C** is _____ p.c.Order **ABC**: _____
shortest longest

Name: _____

A.



The length of **A** is _____ p.c.

The shortest bar is _____ p.c.

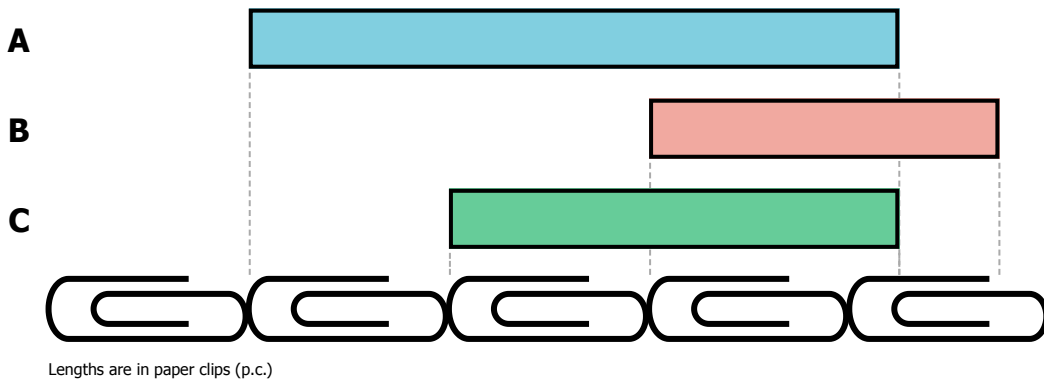
The length of **B** is _____ p.c.

The longest bar is _____ p.c.

The length of **C** is _____ p.c.

Order **ABC**: _____
shortest longest

B.



The length of **A** is _____ p.c.

The shortest bar is _____ p.c.

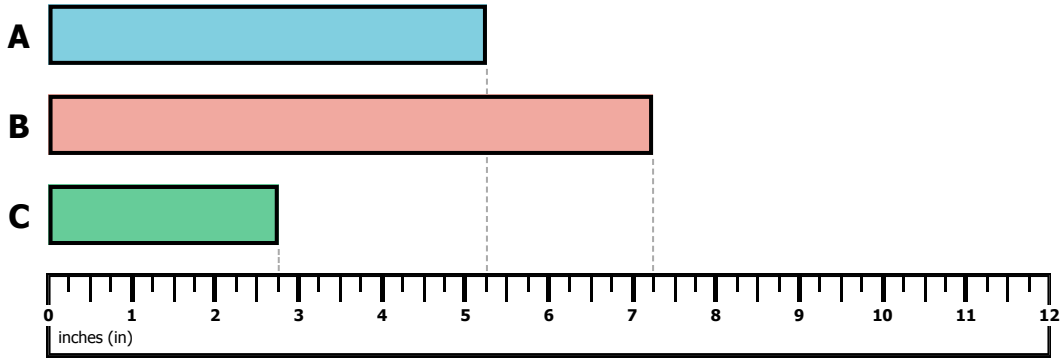
The length of **B** is _____ p.c.

The longest bar is _____ p.c.

The length of **C** is _____ p.c.

Order **ABC**: _____
shortest longest

A.

The length of **A** is _____ in

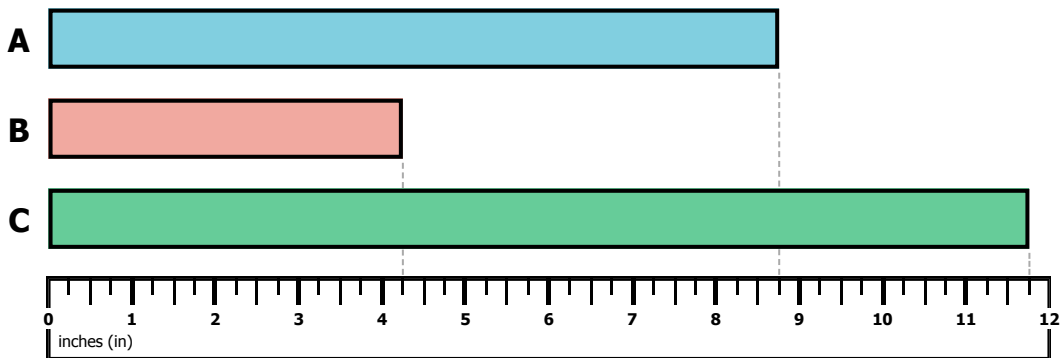
The shortest bar is _____ in

The length of **B** is _____ in

The longest bar is _____ in

The length of **C** is _____ inOrder **ABC**: _____
shortest longest

B.

The length of **A** is _____ in

The shortest bar is _____ in

The length of **B** is _____ in

The longest bar is _____ in

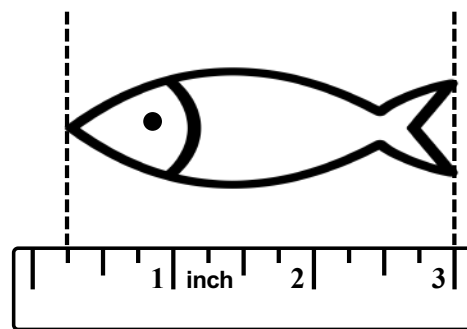
The length of **C** is _____ inOrder **ABC**: _____
shortest longest

Name: _____


The table shows the lengths of 5 young fish, or fingerlings, in inches.

Fish 1	Fish 2	Fish 3	Fish 4	Fish 5	Fish 6
$3 \frac{1}{4}$	$1 \frac{3}{4}$	$2 \frac{1}{2}$	$1 \frac{1}{4}$	$2 \frac{1}{4}$	

- a. Fish 6 is shown on the right. Use the ruler to measure its length to the nearest quarter inch. Write your measurement in the table above.



- b. In the space below, draw a bar graph that shows the length of each fish, in inches.



Name: _____

RIBBON MEASUREMENT

Use the clues to correctly color (or label) each pencil.
Be careful! There's only one way to solve it!

Clues:

Together, the blue and purple ribbons are 8 inches long.

The orange ribbon is $3 \frac{1}{4}$ inches long.

The green ribbon is the longest.

The blue ribbon is 1 inch shorter than the green ribbon.

