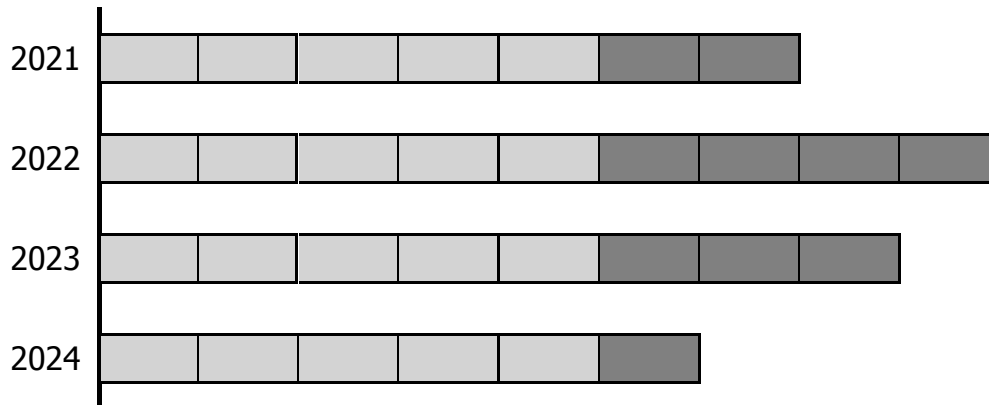


A.

The model below represents the number of pumpkins that were harvested over the last 4 years.

Each  represents 11 pumpkins.



77 pumpkins were harvested in which year?

a) 2021 b) 2022 c) 2023 d) 2024

How many pumpkins were harvested in 2022?

How many pumpkins were harvested in 2024?

How many pumpkins were harvested in all the years?

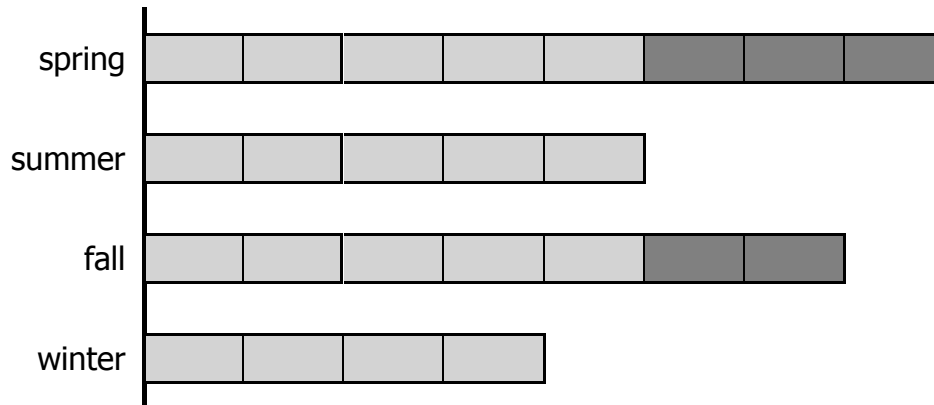
How many more pumpkins were harvested in 2022 than 2021?

How many fewer pumpkins were harvested in 2023 than 2022?

A.

The model below represents the number of cookies that were baked by the school cafeteria during each season last year.

Each represents 12 cookies.



60 cookies were baked in which season?

a) spring b) summer c) fall d) winter

How many cookies were baked in fall?

How many cookies were baked in spring?

How many cookies were baked in all the seasons?

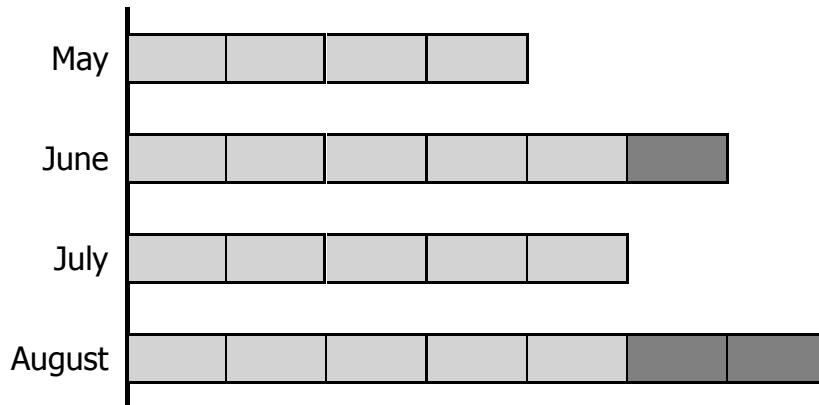
How many more cookies were baked in spring than summer?

How many fewer cookies were baked in summer than fall?

A.

The model below represents the number of books that were donated to the school library last summer.

Each represents 13 books.



65 books were donated in which month?

a) May b) June c) July d) August

How many books were donated in August?

How many books were donated in May?

How many books were donated in all the months?

How many more books were donated in June than May?

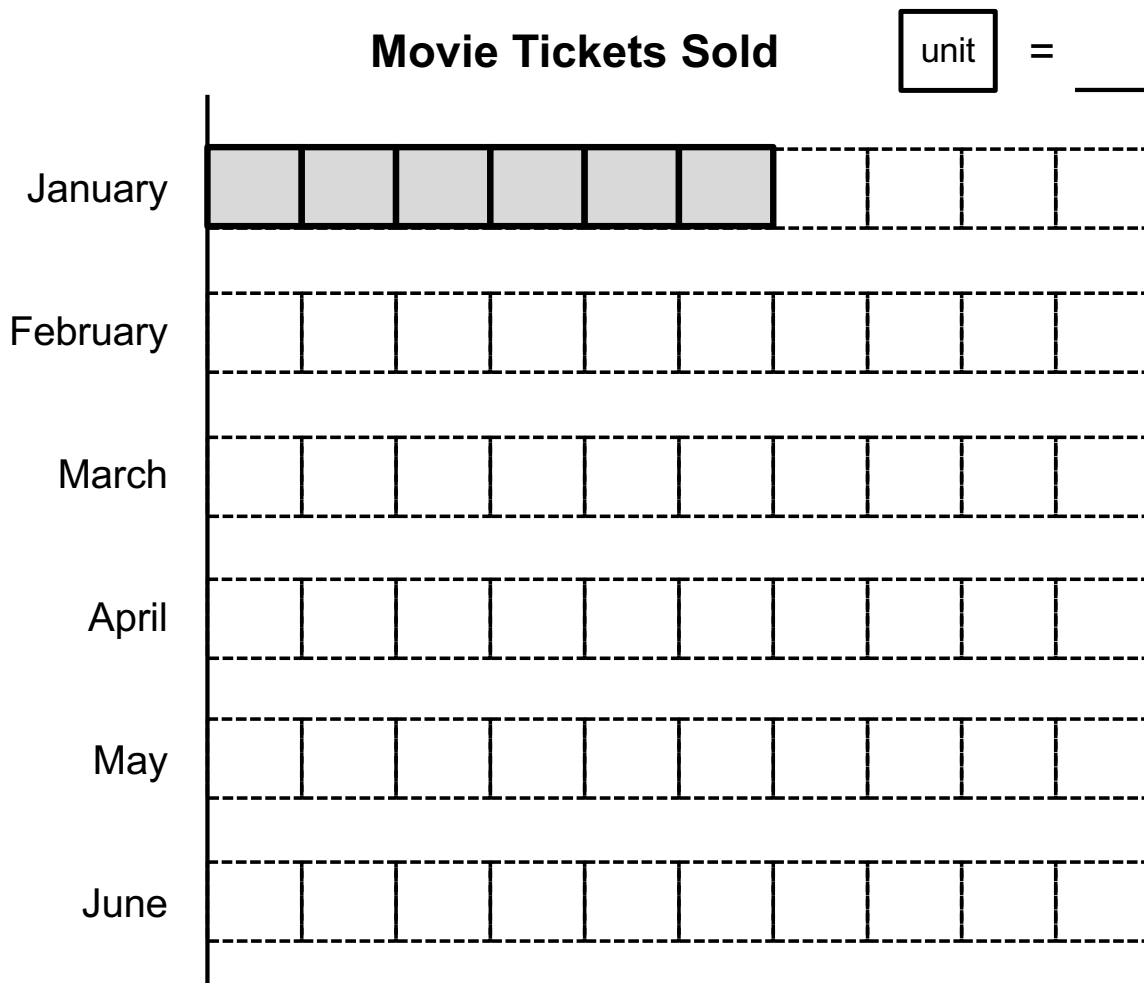
How many fewer books were donated in July than June?

Name: _____

The number of movie tickets sold each month is shown in the table below.

Jan	Feb	Mar	Apr	May	Jun
48	40	56	32	64	72

a. Find the value of one unit bar, then complete the scaled graph below.



Name: _____

MORE OR LESS - B


Use reasoning and computational skills to complete the table and the graph.

Clues:

There are 24 fewer string instruments than percussion instruments.

There are 32 more drums than chimes.

musical instruments		number
percussion instruments	drums	
	chimes	
string instruments	harps	32
	bass	



Each colored square = 8 musical instruments