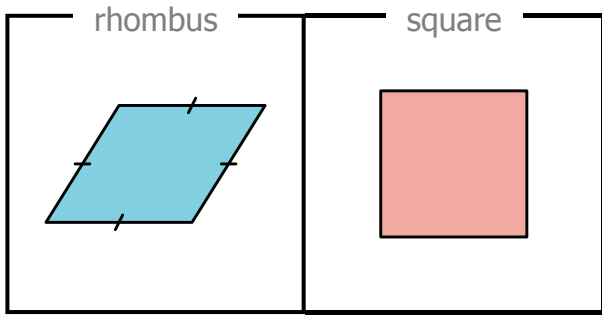


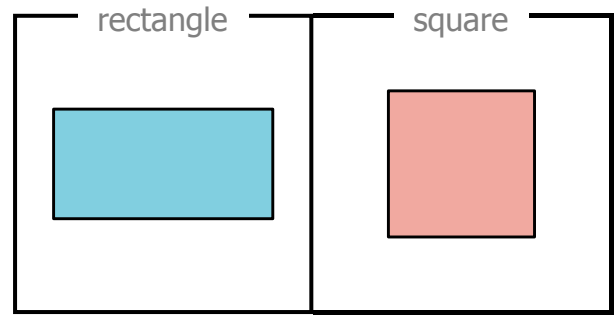
A.



Check off the attributes for each shape:

- |                                     |                    |                                     |
|-------------------------------------|--------------------|-------------------------------------|
| <input type="checkbox"/>            | 3 sides            | <input type="checkbox"/>            |
| <input checked="" type="checkbox"/> | 4 sides            | <input checked="" type="checkbox"/> |
| <input type="checkbox"/>            | 5 sides            | <input type="checkbox"/>            |
| <input type="checkbox"/>            | 6 sides            | <input type="checkbox"/>            |
| <input type="checkbox"/>            | all square corners | <input checked="" type="checkbox"/> |
| <input checked="" type="checkbox"/> | all sides equal    | <input checked="" type="checkbox"/> |

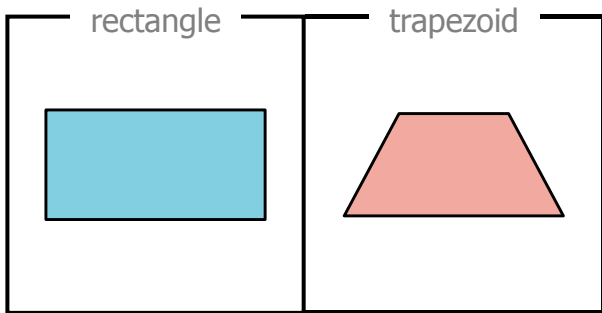
B.



Check off the attributes for each shape:

- |                          |                    |                          |
|--------------------------|--------------------|--------------------------|
| <input type="checkbox"/> | 3 sides            | <input type="checkbox"/> |
| <input type="checkbox"/> | 4 sides            | <input type="checkbox"/> |
| <input type="checkbox"/> | 5 sides            | <input type="checkbox"/> |
| <input type="checkbox"/> | 6 sides            | <input type="checkbox"/> |
| <input type="checkbox"/> | all square corners | <input type="checkbox"/> |
| <input type="checkbox"/> | all sides equal    | <input type="checkbox"/> |

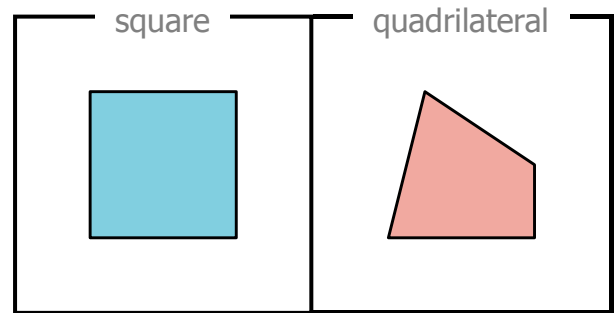
C.



Check off the attributes for each shape:

- |                          |                    |                          |
|--------------------------|--------------------|--------------------------|
| <input type="checkbox"/> | 3 sides            | <input type="checkbox"/> |
| <input type="checkbox"/> | 4 sides            | <input type="checkbox"/> |
| <input type="checkbox"/> | 5 sides            | <input type="checkbox"/> |
| <input type="checkbox"/> | 6 sides            | <input type="checkbox"/> |
| <input type="checkbox"/> | all square corners | <input type="checkbox"/> |
| <input type="checkbox"/> | all sides equal    | <input type="checkbox"/> |

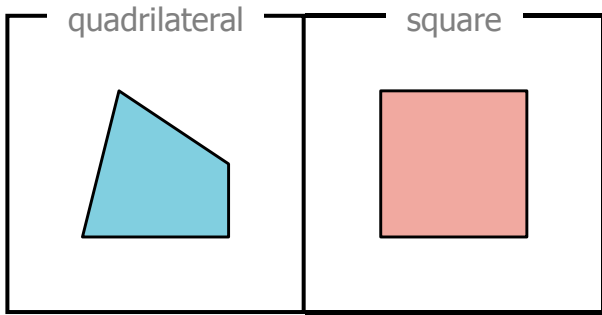
D.



Check off the attributes for each shape:

- |                          |                    |                          |
|--------------------------|--------------------|--------------------------|
| <input type="checkbox"/> | 3 sides            | <input type="checkbox"/> |
| <input type="checkbox"/> | 4 sides            | <input type="checkbox"/> |
| <input type="checkbox"/> | 5 sides            | <input type="checkbox"/> |
| <input type="checkbox"/> | 6 sides            | <input type="checkbox"/> |
| <input type="checkbox"/> | all square corners | <input type="checkbox"/> |
| <input type="checkbox"/> | all sides equal    | <input type="checkbox"/> |

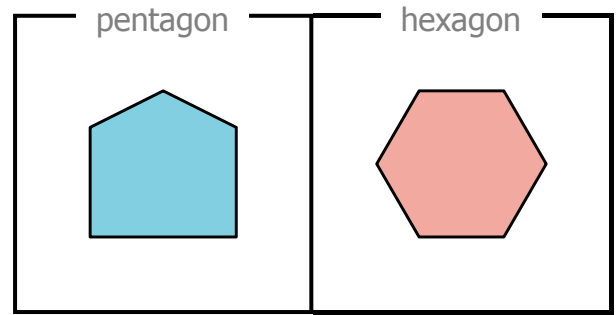
A.



Check off the attributes for each shape:

- |                          |                    |                          |
|--------------------------|--------------------|--------------------------|
| <input type="checkbox"/> | 3 sides            | <input type="checkbox"/> |
| <input type="checkbox"/> | 4 sides            | <input type="checkbox"/> |
| <input type="checkbox"/> | 5 sides            | <input type="checkbox"/> |
| <input type="checkbox"/> | 6 sides            | <input type="checkbox"/> |
| <input type="checkbox"/> | all square corners | <input type="checkbox"/> |
| <input type="checkbox"/> | all sides equal    | <input type="checkbox"/> |

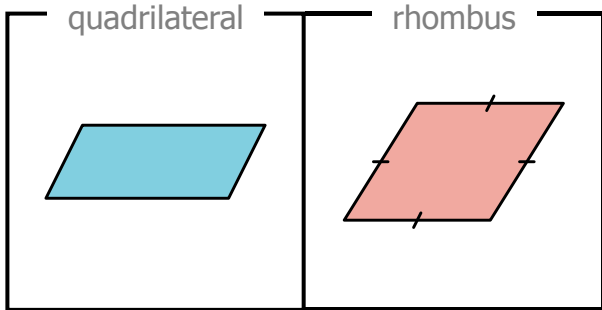
B.



Check off the attributes for each shape:

- |                          |                    |                          |
|--------------------------|--------------------|--------------------------|
| <input type="checkbox"/> | 3 sides            | <input type="checkbox"/> |
| <input type="checkbox"/> | 4 sides            | <input type="checkbox"/> |
| <input type="checkbox"/> | 5 sides            | <input type="checkbox"/> |
| <input type="checkbox"/> | 6 sides            | <input type="checkbox"/> |
| <input type="checkbox"/> | all square corners | <input type="checkbox"/> |
| <input type="checkbox"/> | all sides equal    | <input type="checkbox"/> |

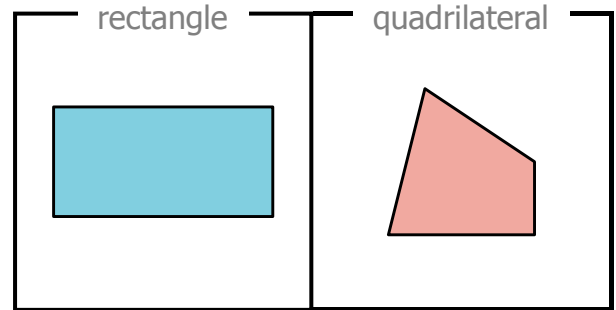
C.



Check off the attributes for each shape:

- |                          |                    |                          |
|--------------------------|--------------------|--------------------------|
| <input type="checkbox"/> | 3 sides            | <input type="checkbox"/> |
| <input type="checkbox"/> | 4 sides            | <input type="checkbox"/> |
| <input type="checkbox"/> | 5 sides            | <input type="checkbox"/> |
| <input type="checkbox"/> | 6 sides            | <input type="checkbox"/> |
| <input type="checkbox"/> | all square corners | <input type="checkbox"/> |
| <input type="checkbox"/> | all sides equal    | <input type="checkbox"/> |

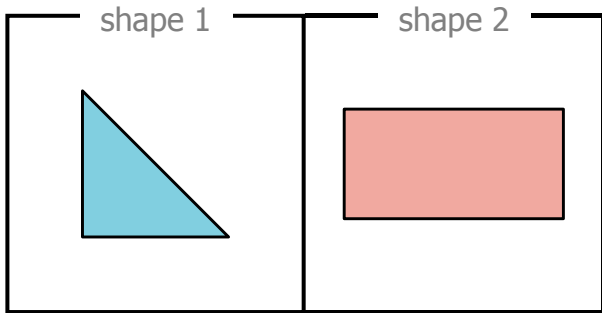
D.



Check off the attributes for each shape:

- |                          |                    |                          |
|--------------------------|--------------------|--------------------------|
| <input type="checkbox"/> | 3 sides            | <input type="checkbox"/> |
| <input type="checkbox"/> | 4 sides            | <input type="checkbox"/> |
| <input type="checkbox"/> | 5 sides            | <input type="checkbox"/> |
| <input type="checkbox"/> | 6 sides            | <input type="checkbox"/> |
| <input type="checkbox"/> | all square corners | <input type="checkbox"/> |
| <input type="checkbox"/> | all sides equal    | <input type="checkbox"/> |

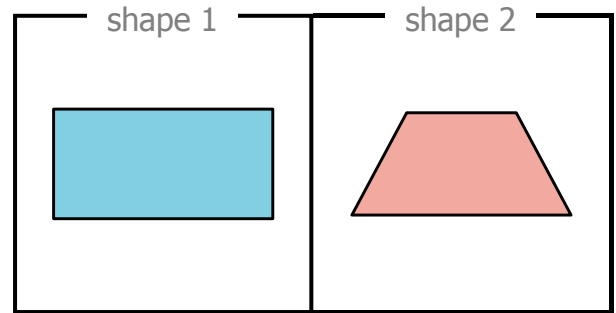
A.



Check off the categories for each shape:

- |                                     |               |                                     |
|-------------------------------------|---------------|-------------------------------------|
| <input checked="" type="checkbox"/> | triangle      | <input type="checkbox"/>            |
| <input type="checkbox"/>            | quadrilateral | <input checked="" type="checkbox"/> |
| <input type="checkbox"/>            | rectangle     | <input checked="" type="checkbox"/> |
| <input type="checkbox"/>            | rhombus       | <input type="checkbox"/>            |
| <input type="checkbox"/>            | square        | <input type="checkbox"/>            |
| <input type="checkbox"/>            | pentagon      | <input type="checkbox"/>            |
| <input type="checkbox"/>            | hexagon       | <input type="checkbox"/>            |

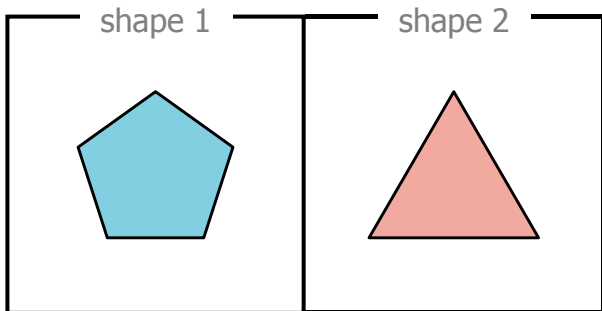
B.



Check off the categories for each shape:

- |                          |               |                          |
|--------------------------|---------------|--------------------------|
| <input type="checkbox"/> | triangle      | <input type="checkbox"/> |
| <input type="checkbox"/> | quadrilateral | <input type="checkbox"/> |
| <input type="checkbox"/> | rectangle     | <input type="checkbox"/> |
| <input type="checkbox"/> | rhombus       | <input type="checkbox"/> |
| <input type="checkbox"/> | square        | <input type="checkbox"/> |
| <input type="checkbox"/> | pentagon      | <input type="checkbox"/> |
| <input type="checkbox"/> | hexagon       | <input type="checkbox"/> |

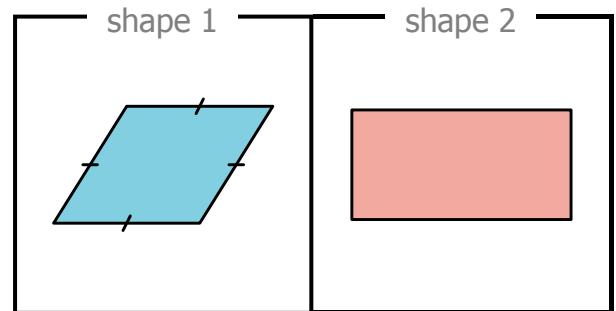
C.



Check off the categories for each shape:

- |                          |               |                          |
|--------------------------|---------------|--------------------------|
| <input type="checkbox"/> | triangle      | <input type="checkbox"/> |
| <input type="checkbox"/> | quadrilateral | <input type="checkbox"/> |
| <input type="checkbox"/> | rectangle     | <input type="checkbox"/> |
| <input type="checkbox"/> | rhombus       | <input type="checkbox"/> |
| <input type="checkbox"/> | square        | <input type="checkbox"/> |
| <input type="checkbox"/> | pentagon      | <input type="checkbox"/> |
| <input type="checkbox"/> | hexagon       | <input type="checkbox"/> |

D.



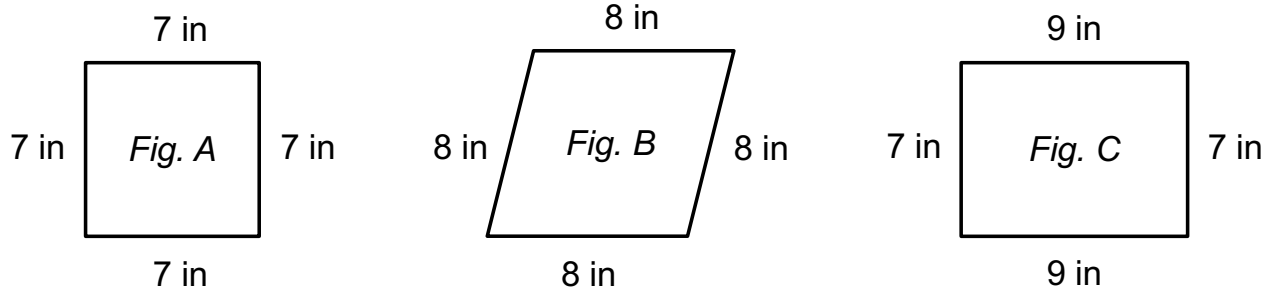
Check off the categories for each shape:

- |                          |               |                          |
|--------------------------|---------------|--------------------------|
| <input type="checkbox"/> | triangle      | <input type="checkbox"/> |
| <input type="checkbox"/> | quadrilateral | <input type="checkbox"/> |
| <input type="checkbox"/> | rectangle     | <input type="checkbox"/> |
| <input type="checkbox"/> | rhombus       | <input type="checkbox"/> |
| <input type="checkbox"/> | square        | <input type="checkbox"/> |
| <input type="checkbox"/> | pentagon      | <input type="checkbox"/> |
| <input type="checkbox"/> | hexagon       | <input type="checkbox"/> |

Name: \_\_\_\_\_

Problem of the Day Lesson 134

3 quadrilaterals are shown below. Figures A and C have square corners.

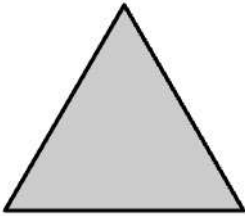


- a. What is the sum of the perimeters of the rhombuses, in inches?
- b. What is the difference in the perimeters of the rectangles, in inches?

Name: \_\_\_\_\_

# SHAPE MATCH

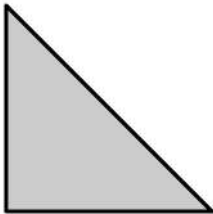
Draw a line from each shape on the left to the matching description on the right.



•

•

- triangle
- 3 sides



•

•


- 3 sides
- sides equal



•

•

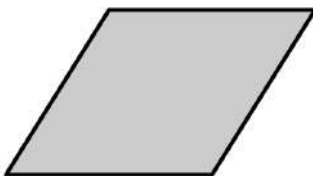
- sides equal
- rhombus



•

•

- quadrilateral
- all square corners



•

•

- rectangle
- all sides equal